




# TET AND PCET REPORT



**JSS INSTITUTE OF EDUCATION**


**Kowdalli, Sakaleshpur Tq, Hassan Dist – 573 134**

# Teacher Placement and CET Practice

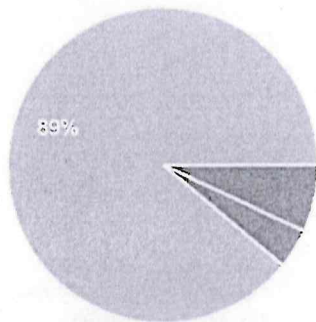
74 responses

Publish analytics

1. Which of the following stage marks the involvement of children in their peer groups?


 Copy

73 responses

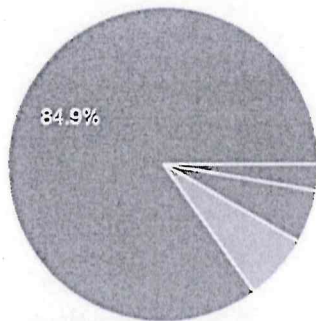


- Adulthood
- Childhood
- Adolescence
- Early childhood

2. A young female teacher, believes in personalised learning because she thinks that


 Copy

73 responses

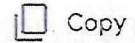


- learners must learn on their own
- students must enjoy their learning
- every person must be exposed to learning
- every learner is unique and must be given a chance to develop to the best of his ability

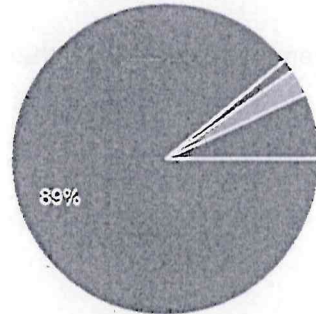


  
**PRINCIPAL**  
J.S.S. Institute of Education  
P.B. 26, SAKALESHPUR-573134  
Hassan Dist.

3. A teacher can identify a stressed child when the child shows the following behaviour.



73 responses

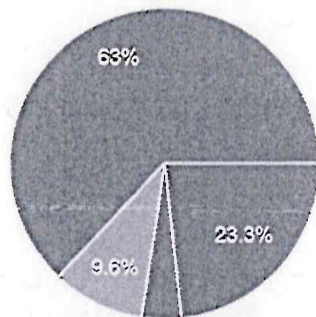


- Aggressive behaviour
- Full concentration in students
- Excessive talking
- Hyperactivity

4. 'Mind Mapping' refers to

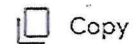


73 responses

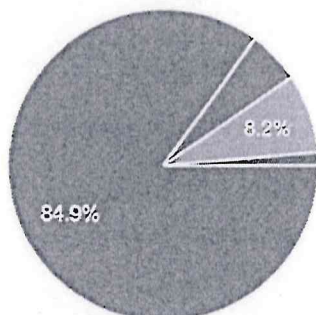


- a technique to enhance comprehension
- a plan of action for an adventure
- drawing the picture of a mind
- researching the function of the mind

5. Identify the type of the following word problem: "I have 6 pencils. Manish has two more than me. How many pencils does Manish have?"



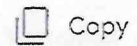
73 responses



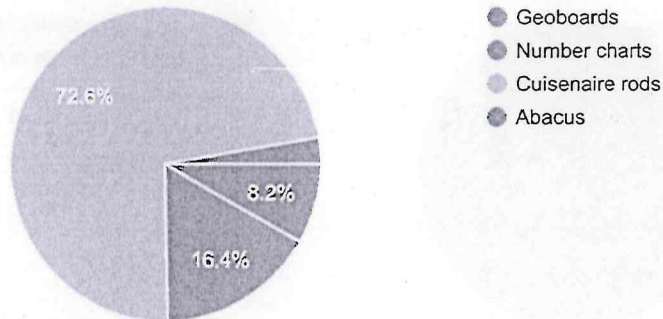
- Comparison addition
- Comparison subtraction
- Takeaway addition
- Takeaway subtraction



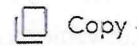
6. Which of the following is most suitable for teaching children the concept of fractions?



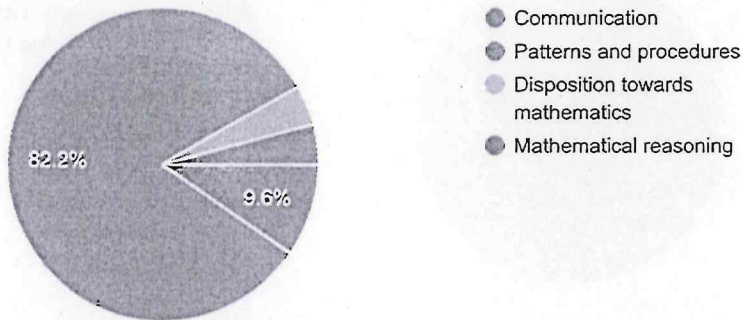
73 responses



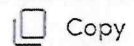
7. Which of the following is not a dimension of assessment of mathematical learning?



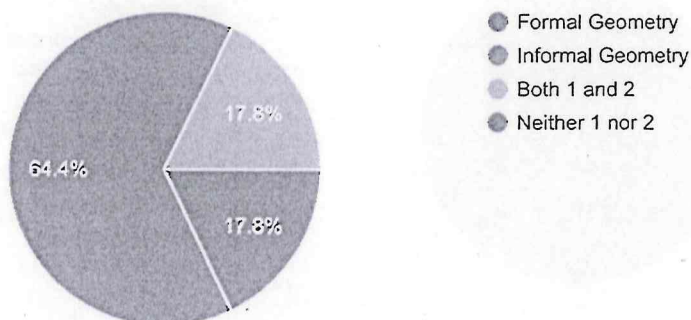
73 responses




8. Which of the following part of Geometry is taught in primary classes?



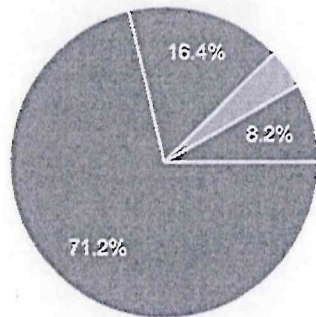
73 responses



9. Which of the following is one of the three types of analysis of pedagogy in education?

 Copy

73 responses

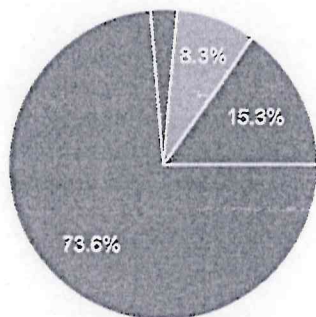


- Pedagogical analysis of beliefs
- Pedagogical analysis of the subject
- Pedagogical analysis of emotions
- None of the above

10. Which of the following is a teacher-related factor affecting learning?


 Copy

72 responses

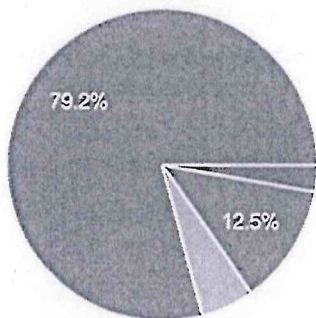


- Mastery over the subject matter
- Proper seating arrangement
- Availability of teaching-learning resources
- None of the above

11. Environmental studies is defined as the branch that deals with the:


 Copy

72 responses




- Design, study, and discovery of new materials.
- The study of humanities, social, biological, and physical sciences.
- Incorporate the information and physical sciences.
- Approach about the natural world and the impact of humans on its integrity.

12. The functional aspects of the ecosystem are:


 Copy

73 responses

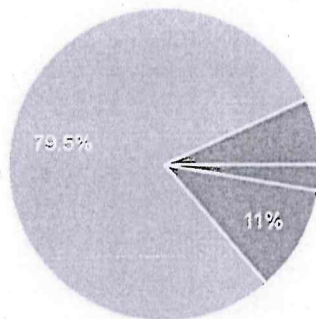


- Energy cycles
- Nutrient cycles
- Food chains
- All of the above

13. Which one of the following is not direct use of forest products?


 Copy

73 responses




- Bamboo for baskets
- Medicine
- Gums and resins
- Grass for grazing

14. Which day is celebrated as World Environment day?

 Copy

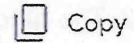
73 responses



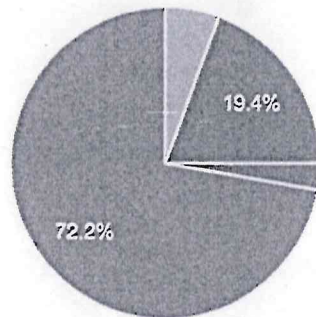
- June 10th
- June 5th
- July 5th
- October 20th



15. A device which connects multimedia device like video camera.

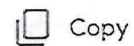


72 responses




- Serial port
- Fire wire
- Parallel port
- USB

16. Which of the following is used for Computer Aided Design Calculation?

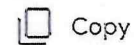


72 responses

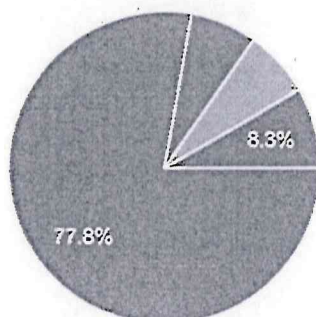


- Micro computers
- Main frame computers
- Hybrid computers
- None of the above

17. Which of the following is correct with respect to spread sheet?



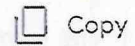
72 responses




- Work book is a document that contains one or more work sheet
- Column is given in numbers
- Row is given in letters
- Intersection of each row and column is called table



18. Which of the following is not related to windows 7?

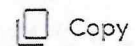


71 responses




- 64 bits processor
- cloud compting
- multiple fire wall
- upgraded version of XP and vista

19. The following is not the feature of internet

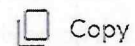


73 responses

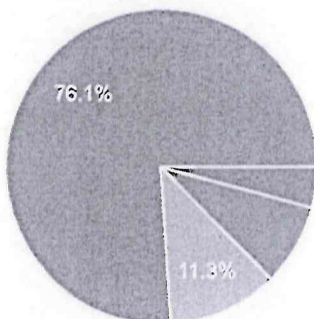


- E-Mail
- Newsgroup
- Chat
- Designing

20. Find the odd one out?



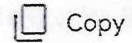
71 responses




- Mouse
- Keyboard
- Touch screen
- Printer



21. The formula to find out the literacy rate is

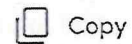


73 responses

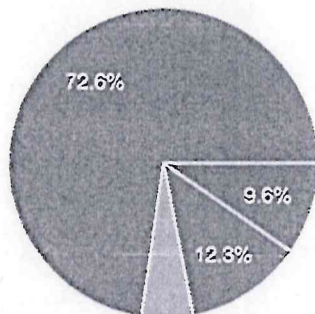


- (Total no. of illiterates / Total population above 7 years of age) x 100
- (Total no. of literates / Total population below 6 years of age) x 100
- (Total no. of literates / Total population above 7 years of a...)
- (Total no. of literates / Total population above 6 years of a...)

22. If CHARCOAL is coded as 4564913, how will you code COALCAR?

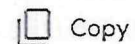


73 responses

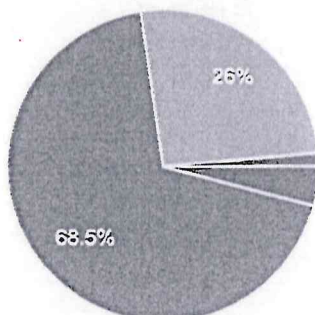


- 4913413
- 6494314
- 6194416
- 4913416

23. The new pedagogical and curricular structure envisaged for ECCE in NEP-2020 is




73 responses

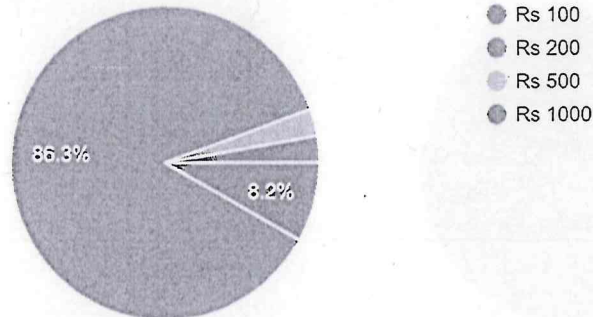


- Preparatory
- Foundational
- Early childhood and care education
- Middle


24. What is the limit of offline digital payment per transaction, as per RBI's recent notification?

 Copy

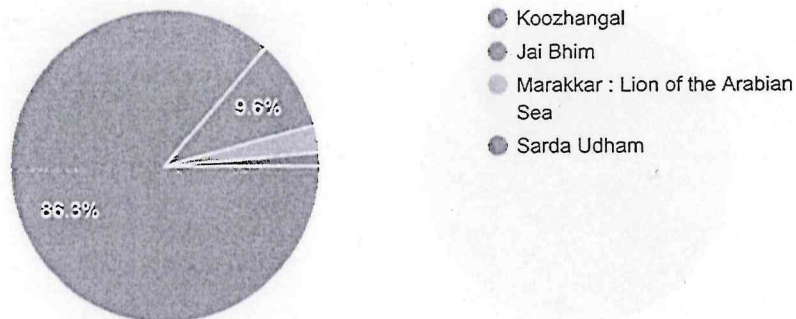
73 responses




25. Which Indian movie won the Best Film award at Dhaka International Film Festival?

 Copy

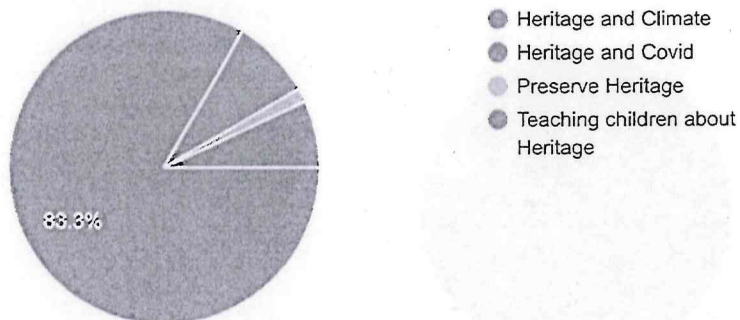
73 responses




26. What is the theme of the 'World Heritage Day 2022'?

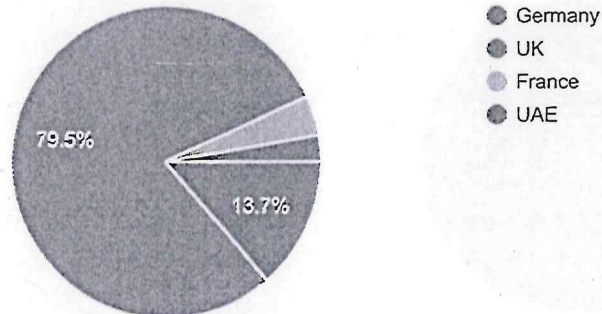
 Copy


72 responses



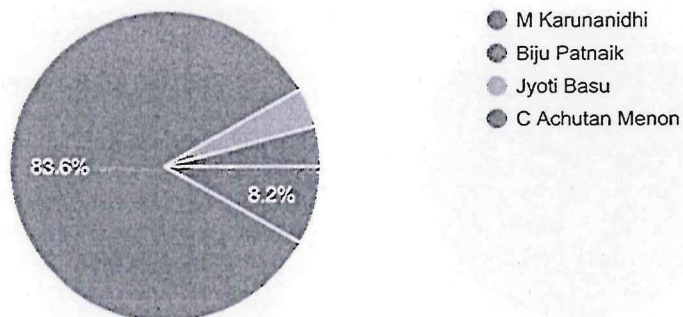
27. India recently signed MoUs on Nuclear Energy Partnership and Global Innovation Partnership, with which country?  Copy


73 responses




28. The book titled 'Adventures of a Daredevil Democrat', which was recently published, narrates the story of which Former Chief-Minister?  Copy

73 responses




29. Who has the largest tenure of over as head of elected government in India (Including chief Minister as well as Prime Minister)  Copy

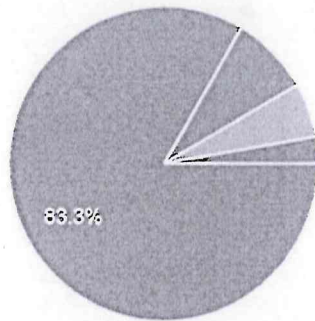
73 responses



30. What was the rank of Bengaluru in the "JLL City Momentum: The World's Top 20 Most Dynamic cities Report, 2019"?


 Copy

72 responses

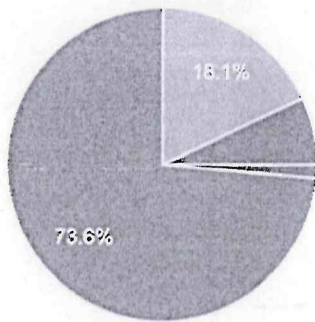


- First
- Second
- Third
- Fourth

31. Who said this statement learning is the acquisition of habits, knowledge and attitudes.


 Copy

72 responses

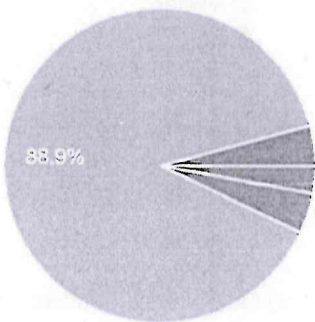


- Murphy
- Norman L Munn
- Crow and Crow
- Skinner

32. Who propounded the theory of classical conditioning learning?

 Copy


72 responses



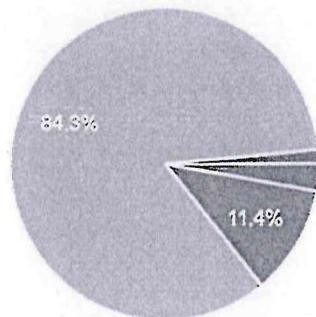
- BF Skinner
- Kohler
- I P Pavlov
- J B Watson



33. The two factor theory of intelligence was propounded by \_\_\_\_\_


 Copy

70 responses

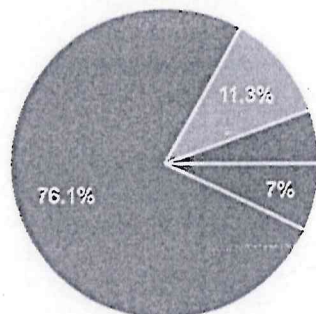


- LL Thurston
- Guilford
- Spearman
- Victoria

34. Which one fo the following is a Projective technique


 Copy

71 responses

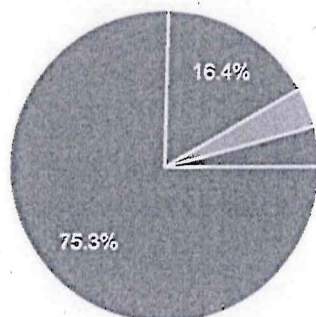


- Observation
- Inkblock test
- Evaluation
- Interview

35. The term reinforcement was coined by \_\_\_\_\_

 Copy

73 responses



- Skinner
- Pavlov
- Murphy
- Vygotsky

This content is neither created nor endorsed by Google. [Report Abuse](#) - [Terms of Service](#) - [Privacy Policy](#).

Google Forms



235 13

## Feedback form on TET/CET classes 2022-24 Batch

Sl.No	Name of the Student Teacher	UUCMS No. / Register No.	1. CET/TET classes helpful in effective time management.	2. CET/TET classes nurture essential skills and develops confidence in facing competitive examinations.	3. It enhances problem solving abilities among the student-teachers.	4. Preparation for CET/TET instills discipline and strong work ethics in student-teachers.	5. The teacher takes interest in the betterment of the weaker students.	6. The teacher is able to maintain discipline in the class and has effective communication skill.	7. CET/TET classes really helpful for us in preparing and clearing the CET/TET exams.	8. CET/TET classes were conducted in accordance with the syllabus.
1	Sridevi GP	U01HY22E0062	Strongly agree	Strongly agree	Strongly agree	Strongly agree	Strongly agree	Agree	Strongly agree	Agree
2	AISHWARYA BENOORA	U01HY22E0013	Agree	Strongly agree	Strongly agree	Agree	Agree	Agree	Agree	Agree
3	KAVANA T M	U01HY22E063	Neutral	Agree	Neutral	Neutral	Disagree	Disagree	Neutral	Strongly agree
4	TARADEVI M R	U01HY22E0072	Agree	Agree	Agree	Agree	Agree	Agree	Agree	Agree
5	Bhanu Priya S	U01HY22E0080	Agree	Agree	Agree	Agree	Neutral	Agree	Agree	Agree
6	Ambaresh	U01HY22E0041	Agree	Agree	Agree	Agree	Neutral	Strongly agree	Strongly agree	Agree
7	Pallavi J N	U01HY22E0043	Agree	Agree	Agree	Agree	Agree	Agree	Agree	Agree
8	Chandana M R	U01HY22E0012	Agree	Agree	Agree	Agree	Agree	Agree	Agree	Agree
9	Suresh Ak	U001HY22E0050	Strongly agree	Agree	Strongly agree	Strongly agree	Agree	Neutral	Strongly agree	Agree



*[Signature]*  
PRINCIPAL

J.S.S. Institute of Education  
P.B. 26, SAKALESHPUR-573 154  
Hassan Dist




30	PRIYADARSHINI B C	U01HY22E0087	Agree	Agree	Agree	Agree	Agree	Neutral	Agree	Agree
31	Vishal NT	U01HY22E0079	Strongly agree	Strongly agree	Strongly agree	Strongly agree	Strongly agree	Strongly agree	Strongly agree	Strongly agree
32	BEERAPPA	U01HY22E0034	Agree	Strongly agree	Strongly agree	Strongly agree	Agree	Agree	Strongly agree	Strongly agree
33	AYYANNA	U01HY22E0058	Agree	Strongly agree	Strongly agree	Strongly agree	Agree	Strongly agree	Strongly agree	Strongly agree
34	PRAGATHI A S	U01HY22E0071	Agree	Agree	Agree	Agree	Agree	Strongly agree	Agree	Strongly agree
35	BASAVARAJ	U01HY22E0026	Agree	Agree	Agree	Neutral	Disagree	Agree	Agree	Agree
36	Sumanth R	U01HY22E0059	Agree	Agree	Agree	Agree	Neutral	Agree	Agree	Neutral
37	Swathi.s	U01HY22E0054	Agree	Agree	Agree	Neutral	Agree	Agree	Agree	Agree
38	Bheemanna kori	U01HY22E0031	Agree	Agree	Strongly agree	Agree	Agree	Strongly agree	Strongly agree	Agree
39	AMIT HULAKUND	U01HY22E0006	Agree	Agree	Agree	Agree	Agree	Agree	Strongly agree	Agree
40	Sushmitha B B	U01HY22E0020	Agree	Agree	Agree	Agree	Agree	Strongly agree	Strongly agree	Agree
41	Divyashree E	U01HY22E0060	Agree	Agree	Agree	Agree	Agree	Strongly agree	Strongly agree	Agree
42	SHIVARAJ	U01HY22E0014	Strongly agree	Agree	Agree	Agree	Agree	Agree	Agree	Agree
43	HARSHITHA H.L	U01HY22E0039	Strongly agree	Agree	Agree	Agree	Strongly agree	Agree	Strongly agree	Agree
44	REKHA H I	U01HY22E0037	Agree	Agree	Agree	Agree	Agree	Agree	Strongly agree	Agree
45	RASHMI H.I	U01HY22E0036	Agree	Agree	Agree	Agree	Agree	Agree	Agree	Agree
46	SANGEETHA D R	U01HY22E0082	Agree	Agree	Neutral	Agree	Neutral	Neutral	Neutral	Agree
47	AMBUJAKSHI S R	U01HY22E0009	Agree	Agree	Neutral	Neutral	Neutral	Agree	Agree	Neutral
48	MEGHARAJA H	U01HY22E0069	Agree	Agree	Agree	Agree	Agree	Agree	Strongly agree	Agree
49	LOKESH	U01HY22E0015	Agree	Agree	Agree	Agree	Agree	Agree	Strongly agree	Agree






70	DEEKSHA SAKPHAL DR	U01HY22E0070	Agree	Agree	Agree	Agree	Agree	Strongly agree	Agree	Strongly agree
71	VARSHITHA B	U01HY22E0074	Agree	Agree	Strongly agree	Agree	Agree	Agree	Strongly agree	Agree



  
**PRINCIPAL**  
J.S.S. Institute of Education  
P.B. 26, SAKALESHPUR-573 134  
Hassan Dist

  
**PRINCIPAL**  
J.S.S. Institute of Education  
P.B. 26, SAKALESHPUR-573134  
Hassan Dist.

# Feedback form on TET/CET classes 2022-24 Batch

71 responses

Publish analytics



### Name of the Student Teacher

71 responses

Suresh Ak

Gowthami KN

Sridevi GP

AISHWARYA BENOORA

KAVANA T M

TARADEVI M R

Bhanu Priya S

Ambaresh

Pallavi J N

Chandana M R

VINUTHA G A

KARTHIK D N

Sharanabasava

RAJINI M J

CHANNABASAPPA GUDADINNI

LAVANYA G S

VIJAYALAXMI BARKER R

Meghana B L

Manasa H C

Tejas Y P

Veena CM



RAVI CHOWDKI

Mahalakshmi SM

Tejaswini S R

Bhoomika ms

Ramesh

LINGARAJ

Venkatesh

Shabreen Banu

YAMANOORAPPA

PRIYADARSHINI B C

Vishal NT

BEERAPPA

AYYANNA

PRAGATHI A S

BASAVARAJ

Sumanth R

Swathi.s

Bheemanna kori

AMIT HULAKUND

Sushmitha B B

Divyashree E

SHIVARAJ

HARSHITHA H.L

REKHA H I

RASHMI H.I

SANGEETHA D R

AMBUJAKSHI S R

MEGHARAJA H

LOKESH

Karibasava k

Mahesha B

DHANYASHREE K P

POORNIMA

VIDYA M V

Anusha P. N

MAMATHA Y. n

SINCHANA AJ

Yallappa

LATHA H R

Divyashree P G

Iambani Mallesha

HEMLA NAIK K

HARIJANA PADMAVATHI

Archana SV

Deepa upper

SHANTALA U



7/9/24, 11:43 AM

Feedback form on TET/CET classes 2022-24 Batch

DEEKSHA SAKPHAL DR

VARSHITHA B



**PRINCIPAL**

**J.S.S. Institute of Education  
P.B. 26, SAKALESHPUR-573 134  
Hassan Dist**



**PRINCIPAL**

**J.S.S. Institute of Education  
P.B. 26, SAKALESHPUR-573134  
Hassan Dist.**



**UUCMS No. / Register No.**

71 responses

U01HY22E0022

U01HY22E0067

U01HY22E0062

U01HY22E0013

U01HY22E063

U01HY22E0072

U01HY22E0080

U01HY22E0041

U01HY22E0043

U01HY22E0012

U001HY22E0050

U01HY22E0017

U01HY22E0068

U01HY22E0028

U01HY22E0083

U01HY22E0052

U01HY22E0035

U01HY22E0066

U01HY22E0005

U01HY22E0055

U01HY22E0023





U01HY22E0064  
U01HY22E0084  
U01HY22E0056  
U01HY22E0081  
U01HY22E0078  
U01HY22E0046  
U01HY22E0061  
U01HY22E0045  
U01HY22E0087  
U01HY22E0079  
U01HY22E0034  
U01HY22E0058  
U01HY22E0071  
U01HY22E0026  
U01HY22E0059  
U01HY22E0054  
U01HY22E0031  
U01HY22E0006  
U01HY22E0020  
U01HY22E0060  
U01HY22E0014  
U01HY22E0039  
U01HY22E0037



U01HY22E0036

U01HY22E0082

U01HY22E0009

U01HY22E0069

U01HY22E0015

U01HY22E0027

U01HY22E0076

U01HY22E0051

U01HY22E0038

U01HY22E0011

U01HY22E0008

U01HY22E0025

U01HY22E0057

U01HY22E0048

U01HY22E0003

U01HY22E0044

U01hY22E0042

U01HY22E0040


U01HY22E0030

U01HY22E0050

U01HY22E0002

U01HY22E0077


U01HY22E0019

  
**PRINCIPAL**  
**J.S.S. Institute of Education**  
**P.B. 26, SAKALESHPUR-573 134**  
**Hassan Dist**

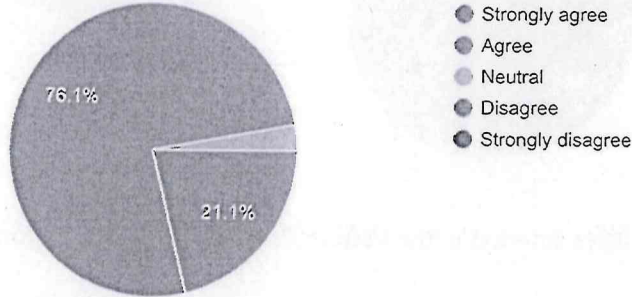
U01HY22E0070

U01HY22E0074


**1. CET/TET classes helpful in effective time management.**

 Copy


71 responses




**2. CET/TET classes nurture essential skills and develops confidence in facing competitive examinations.**

 Copy

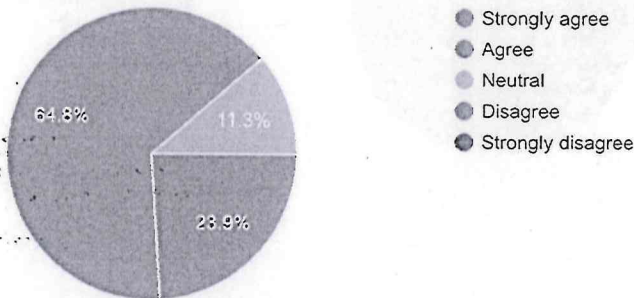
71 responses




**3. It enhances problem solving abilities among the student-teachers.**

 Copy


71 responses




**4. Preparation for CET/TET instills discipline and strong work ethics in student-teachers.**

 Copy


71 responses




**5. The teacher takes interest in the betterment of the weaker students.**

 Copy

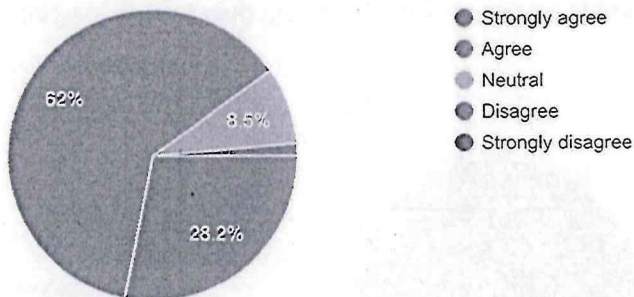
71 responses




**6. The teacher is able to maintain discipline in the class and has effective communication skill.**

 Copy

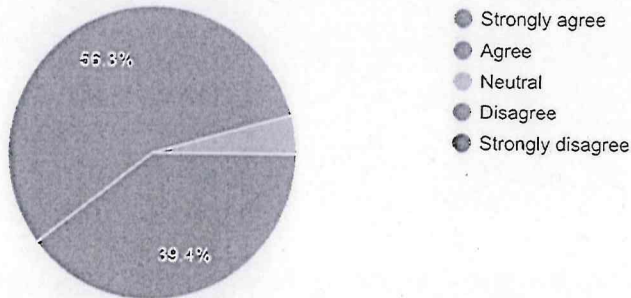
71 responses




7. CET/TET classes really helpful for us in preparing and clearing the CET/TET exams.

 Copy


71 responses



8. CET/TET classes were conducted in accordance with the syllabus.


 Copy


71 responses



This content is neither created nor endorsed by Google. [Report Abuse](#) - [Terms of Service](#) - [Privacy Policy](#)

Google Forms

  
**PRINCIPAL**  
J.S.S. Institute of Education  
P.B.26, SAKALESHPUR-573134  
Hassan Dist.

  
**PRINCIPAL**  
J.S.S. Institute of Education  
P.B. 26, SAKALESHPUR-573 1 :  
Hassan Dist





## JSS INSTITUTE OF EDUCATION

(Recognized by the NCTE and Affiliated to university Mysore, Mysore)

Sakleshpur-573134, PB No 26, Hassan Dist.

Email: [jssioebedskp@gmail.com](mailto:jssioebedskp@gmail.com) website: <http://jssioebedskp.org>

Phone No: 9740591647

---

### ANALYSIS REPORT ON FEED BACK FORM ON CET/TET CLASSES 2022-24 BATCH

The present feedback form is to assess CET/TET classes. The items been designed to get the feedback on CET/TET classes.

There were 8 items in the feedback forms followed by 5 point scale. Each student-teacher should carefully read the items and mark out the suitable response.

From the above data, it is concluded, there were 85 students out of which, 71 student-teachers of 2022-24 batch responded. Among them 76.1% of the response were strongly agreed and 21.1% of the responses were agreed. In total 97.2% the responses revealed that CET/TET helpful in effective time management. (Graph 1)

Among them 71.8% of the responses were strongly agreed and 25.4% of the responses were agreed. In total 97.2% the responses revealed that CET/TET classes nurture essential skill and develop confidence in facing competitive exams. (Graph 2)

Among them 64.8% of the responses were strongly agreed and 23.9% of the responses were agreed. In total 88.7% the responses revealed that CET/TET classes enhances problem solving abilities among the student teachers, (Graph 3)

Among them 78.9% of the responses were strongly agreed and 11.3% of the responses were agreed. In total 90.2% the responses revealed that, preparation for CET/TET instills discipline and strong work ethics in student-teachers. (Graph 4)


Among them 66.2% of the response were strongly agreed and 14.1% of the responses were agreed, In total 80.3% of the responses revealed that, the teacher takes interest the betterment of the weaker students. (Graph 5)


Among them 62% of the responses were strongly agreed and 28.2% of the responses were agreed. In total 90.3% of the responses reveal that, the teacher is able to maintain discipline in the class and has effective communication. (Graph 6)

Among them 56.3% of the responses were strongly agreed and 39.4% responses were agreed. In total 95.7% of the responses reveal that, CET/TET classes really helpful for them in preparing and clearing CET/TET exams. (Graph 7)

Among them, 57.7% responses were strongly agreed and 31% responses were agreed. In total 88.7% of the responses revealed that, CET/TET classes were conducted in accordance with the syllabus. (Graph 8)

It is concluded that, these classes were very much helpful because the teacher's trainees are from rural background and backward areas, lack in mental ability, reasoning ability and psychology related aspects. Hence from the above results students are getting benefited from these classes.



  
SIC PRINCIPAL 10/11/24  
J.S.S. Institute of Education  
P.B. 26, SAKALESHPUR-573 134  
Hassan Dist

# JSS INSTITUTE OF EDUCATION, SAKALESHPUR

## TEACHER PLACEMENT COMMON ENTRANCE TEST - OMR ANSWER SHEET

Name ..... Batch .....

Mobile No. .... Test Date...../...../.....


### INSTRUCTIONS FOR FILLING THE SHEET

1. This sheet should not be folded or crushed.
2. Use only blue/ black ball point pen to fill the circles.
3. Use of pencil is strictly prohibited.
4. Circles should be darkened completely and properly.
5. Cutting and erasing on this sheet is not allowed.
6. Do not use any stray marks on the sheet.
7. Do not use marker or white fluid to hide the mark.

#### WRONG METHODS



#### CORRECT METHOD



Candidate signature

Invigilator Signature

Marks obtained

	1	2	3	4
1	<input type="radio"/>	<input type="radio"/>	<input type="radio"/>	<input type="radio"/>
2	<input type="radio"/>	<input type="radio"/>	<input type="radio"/>	<input type="radio"/>
3	<input type="radio"/>	<input type="radio"/>	<input type="radio"/>	<input type="radio"/>
4	<input type="radio"/>	<input type="radio"/>	<input type="radio"/>	<input type="radio"/>
5	<input type="radio"/>	<input type="radio"/>	<input type="radio"/>	<input type="radio"/>
6	<input type="radio"/>	<input type="radio"/>	<input type="radio"/>	<input type="radio"/>
7	<input type="radio"/>	<input type="radio"/>	<input type="radio"/>	<input type="radio"/>
8	<input type="radio"/>	<input type="radio"/>	<input type="radio"/>	<input type="radio"/>
9	<input type="radio"/>	<input type="radio"/>	<input type="radio"/>	<input type="radio"/>
10	<input type="radio"/>	<input type="radio"/>	<input type="radio"/>	<input type="radio"/>
11	<input type="radio"/>	<input type="radio"/>	<input type="radio"/>	<input type="radio"/>
12	<input type="radio"/>	<input type="radio"/>	<input type="radio"/>	<input type="radio"/>
13	<input type="radio"/>	<input type="radio"/>	<input type="radio"/>	<input type="radio"/>
14	<input type="radio"/>	<input type="radio"/>	<input type="radio"/>	<input type="radio"/>
15	<input type="radio"/>	<input type="radio"/>	<input type="radio"/>	<input type="radio"/>
16	<input type="radio"/>	<input type="radio"/>	<input type="radio"/>	<input type="radio"/>
17	<input type="radio"/>	<input type="radio"/>	<input type="radio"/>	<input type="radio"/>
18	<input type="radio"/>	<input type="radio"/>	<input type="radio"/>	<input type="radio"/>
19	<input type="radio"/>	<input type="radio"/>	<input type="radio"/>	<input type="radio"/>
20	<input type="radio"/>	<input type="radio"/>	<input type="radio"/>	<input type="radio"/>

	1	2	3	4
21	<input type="radio"/>	<input type="radio"/>	<input type="radio"/>	<input type="radio"/>
22	<input type="radio"/>	<input type="radio"/>	<input type="radio"/>	<input type="radio"/>
23	<input type="radio"/>	<input type="radio"/>	<input type="radio"/>	<input type="radio"/>
24	<input type="radio"/>	<input type="radio"/>	<input type="radio"/>	<input type="radio"/>
25	<input type="radio"/>	<input type="radio"/>	<input type="radio"/>	<input type="radio"/>
26	<input type="radio"/>	<input type="radio"/>	<input type="radio"/>	<input type="radio"/>
27	<input type="radio"/>	<input type="radio"/>	<input type="radio"/>	<input type="radio"/>
28	<input type="radio"/>	<input type="radio"/>	<input type="radio"/>	<input type="radio"/>
29	<input type="radio"/>	<input type="radio"/>	<input type="radio"/>	<input type="radio"/>
30	<input type="radio"/>	<input type="radio"/>	<input type="radio"/>	<input type="radio"/>
31	<input type="radio"/>	<input type="radio"/>	<input type="radio"/>	<input type="radio"/>
32	<input type="radio"/>	<input type="radio"/>	<input type="radio"/>	<input type="radio"/>
33	<input type="radio"/>	<input type="radio"/>	<input type="radio"/>	<input type="radio"/>
34	<input type="radio"/>	<input type="radio"/>	<input type="radio"/>	<input type="radio"/>
35	<input type="radio"/>	<input type="radio"/>	<input type="radio"/>	<input type="radio"/>
36	<input type="radio"/>	<input type="radio"/>	<input type="radio"/>	<input type="radio"/>
37	<input type="radio"/>	<input type="radio"/>	<input type="radio"/>	<input type="radio"/>
38	<input type="radio"/>	<input type="radio"/>	<input type="radio"/>	<input type="radio"/>
39	<input type="radio"/>	<input type="radio"/>	<input type="radio"/>	<input type="radio"/>
40	<input type="radio"/>	<input type="radio"/>	<input type="radio"/>	<input type="radio"/>

	1	2	3	4
41	<input type="radio"/>	<input type="radio"/>	<input type="radio"/>	<input type="radio"/>
42	<input type="radio"/>	<input type="radio"/>	<input type="radio"/>	<input type="radio"/>
43	<input type="radio"/>	<input type="radio"/>	<input type="radio"/>	<input type="radio"/>
44	<input type="radio"/>	<input type="radio"/>	<input type="radio"/>	<input type="radio"/>
45	<input type="radio"/>	<input type="radio"/>	<input type="radio"/>	<input type="radio"/>
46	<input type="radio"/>	<input type="radio"/>	<input type="radio"/>	<input type="radio"/>
47	<input type="radio"/>	<input type="radio"/>	<input type="radio"/>	<input type="radio"/>
48	<input type="radio"/>	<input type="radio"/>	<input type="radio"/>	<input type="radio"/>
49	<input type="radio"/>	<input type="radio"/>	<input type="radio"/>	<input type="radio"/>
50	<input type="radio"/>	<input type="radio"/>	<input type="radio"/>	<input type="radio"/>
51	<input type="radio"/>	<input type="radio"/>	<input type="radio"/>	<input type="radio"/>
52	<input type="radio"/>	<input type="radio"/>	<input type="radio"/>	<input type="radio"/>
53	<input type="radio"/>	<input type="radio"/>	<input type="radio"/>	<input type="radio"/>
54	<input type="radio"/>	<input type="radio"/>	<input type="radio"/>	<input type="radio"/>
55	<input type="radio"/>	<input type="radio"/>	<input type="radio"/>	<input type="radio"/>
56	<input type="radio"/>	<input type="radio"/>	<input type="radio"/>	<input type="radio"/>
57	<input type="radio"/>	<input type="radio"/>	<input type="radio"/>	<input type="radio"/>
58	<input type="radio"/>	<input type="radio"/>	<input type="radio"/>	<input type="radio"/>
59	<input type="radio"/>	<input type="radio"/>	<input type="radio"/>	<input type="radio"/>
60	<input type="radio"/>	<input type="radio"/>	<input type="radio"/>	<input type="radio"/>



33. ಕೆಳಗಿನ ಯಾವ ಒಂದನ್ನು ಹೊರತು ಪಡಿಸಿ ಉಳಿದ ವರ್ಗಗಳು ಲಿಂಗವನ್ನು ಪ್ರಭಾವಿಸುತ್ತವೆ  
 1) ಜನಾಂಗೀಯತೆ 2) ಧರ್ಮ 3) ಅಭಿಕ್ಷಮತೆ 4) ಭಾಷೆ

34. ಶಿಕ್ಷಕರೊಬ್ಬರು ತನ್ನ ತರಗತಿಯಲ್ಲಿ ಕ್ರಿಯಾಸಂಶೋಧನೆಯನ್ನು ಕೈಗೊಳ್ಳಲು ನಿರ್ಧರಿಸುತ್ತಾರೆ  
 1) ಇಲಾಖೆಯಿಂದ ಪ್ರಶಸ್ತಿಯನ್ನು ಪಡೆಯಲು  
 2) ಲೇಖನವನ್ನು ಪ್ರಕಟಿಸಲು  
 3) ವಿದ್ಯಾರ್ಥಿಗಳ ಉಚ್ಚಾರಣೆಯ ದೋಷಕ್ಕೆ ಪರಿಹಾರ ಕಂಡುಕೊಳ್ಳಲು  
 4) Ph.D ಪಡೆಯುವುದಕ್ಕಾಗಿ ಪ್ರೌಢ ಪ್ರಬಂಧವನ್ನು ಬರೆಯಲು.

35. ಸರಿಯಾಗಿ ಹೊಂದಿಸಲಾದ ಕೋಡ್‌ಗಳನ್ನು ಗುರುತಿಸಿ

A	B		
A. ಅಂತರಾಜಲೋಕನ	1. ಸಮಸ್ಯೆಗಳ ನೈದಾನಿಕತೆ ಮತ್ತು ಪರಿಹಾರಗಳಿಗೆ ಸಲಹೆ		
B. ಪಾಯೋಗಿಕತೆ	2. ವಿವಿಧ ಮೂಲಗಳಿಂದ ದತ್ತಾಂಶ ಸಂಗ್ರಹಣೆ ಮತ್ತು ಅರ್ಥೈಸುವಿಕೆ		
C. ವ್ಯಕ್ತಿ ಅಧ್ಯಯನ	3. ಒಬ್ಬ ವ್ಯಕ್ತಿಯ ಮಾನಸಿಕ ಪ್ರಕ್ರಿಯೆಗಳನ್ನು ವೀಕ್ಷಿಸುವುದು		
D. ಸಮೀಕ್ಷೆ	4. ನಿಯಂತ್ರಿತ ಸನ್ನಿವೇಶದಲ್ಲಿ ವರ್ತನೆಗಳ ಅಧ್ಯಯನ		
1) A-2	2) B-1	3) C-4	4) D-3
2) A-1	2) B-3	3) C-2	4) D-4
3) A-3	2) B-4	3) C-1	4) D-2
4) A-4	2) B-2	3) C-3	4) D-1

36. ಉತ್ತರ ಬಾಲ್ಯಾವಸ್ಥೆಯಲ್ಲಿ ನಿರೀಕ್ಷಿತ ಸಾಮಾಜಿಕ ಪಾತ್ರಗಳನ್ನು ಸಮೂಹ ಸಮ್ಮತಿ ವಿನ್ಯಾಸಗಳನ್ನು ಅನುಸರಿಸುವ ವರ್ತನೆಯನ್ನು ಕಲಿಯುತ್ತಾರೆ ಈ ಗುಣಲಕ್ಷಣವು  
 1) ಕೂಟಿಯುಗ 2) ಅನುಕರಣ ವಯಸ್ಸು 3) ಕ್ರಿಯಾತ್ಮಕ ಮನಸ್ಸು 4) ಅನುಸರಣ ವಯಸ್ಸು

37. ವ್ಯಕ್ತಿನಿಷ್ಠ ವ್ಯಕ್ತಿತ್ವ ಪರೀಕ್ಷೆ ಇದೊಂದು ಉದಾಹರಣೆಯಾಗಿದೆ

- 1) ದರ್ಜಾಮಾಪನ 2) ಸಾಂದರ್ಭಿಕ ಪರೀಕ್ಷೆ 3) ಚಿತ್ರ ಬಿಡಿಸುವ ಪರೀಕ್ಷೆ 4) ವ್ಯಕ್ತಿ ಚರಿತ್ರೆ

38. ಅಲ್ಪ ಕಲಿಕಾ ಸ್ಮರಣೆಯುಳ್ಳ ಇಂದ್ರಿಯ ಸಂಬಂಧವಾದ ಬಿಂಬವು ಉಳಿಯುವುದು

- 1) 30 ಸೆಕೆಂಡ್‌ಗಳಿಗೂ ಹೆಚ್ಚುಕಾಲ 3) ಒಂದು ಘಂಟೆ  
 2) ಒಂದು ದಿನ 4) 30 ಸೆಕೆಂಡ್ ಅಥವಾ ಅದಕ್ಕೂ ಕಡಿಮೆ

39. ದಿವ್ಯಕ್ರಿಯಾ ಇರುವ ಮಕ್ಕಳಿಗೆ ಇವುಗಳಲ್ಲಿ ತೊಂದರೆಯುಂಟಾಗುತ್ತದೆ

- 1) ಬರವಣಿಗೆಯಲ್ಲಿ 2) ಅಂಕಗಣಿತದಲ್ಲಿ 3) ಓದುವುದರಲ್ಲಿ 4) ಕಲಿಕೆಯಲ್ಲಿ

40. ಅರಾಧ್ಯಗಳ ನೈಜ ವಯಸ್ಸು 10 ವರ್ಷಗಳು ಮತ್ತು ಮಾನಸಿಕ ವಯಸ್ಸು 12 ವರ್ಷಗಳು ಅವಳ ಬುದ್ಧಿಶಕ್ತಿ ಮಟ್ಟವು

- 1) 100 2) 90 3) 110 4) 100

### PART - IV SOCIAL SCIENCE

- 41) ಇತಿಹಾಸವನ್ನು ಬೋಧಿಸಬೇಕಾದದ್ದು.  
 1) ಪ್ರಾತ್ಯಕ್ಷಿಕೆವಾಗಿ 2) ಉದಾರಣೆ ಮೂಲಕ 3) ನೈಜವಾಗಿ 4) ಕಾಲ್ಪನಿಕವಾಗಿ
- 42) ಸಾಮಾಜಿಕ ವಿಜ್ಞಾನ ಬೋಧನೆಯಿಂದ ಮಕ್ಕಳಲ್ಲಿ ಬೆಳಸಬಹುದಾದ ಮುಖ್ಯ ಸಾಮರ್ಥ್ಯವೆಂದರೆ,  
 1) ಆವಲೋಕನ 2) ವಿಮರ್ಶಾತ್ಮಕತೆ 3) ಆದ್ಯತಿಕತೆ 4) ಕಲ್ಪನಾಸಮರ್ಥ್ಯ
- 43) ಪ್ರಾತ್ಯಕ್ಷಿಕೆಯ ಬೋಧನ ವಿಧಾನಕ್ಕೆ ಹೆಚ್ಚು ಸಹಕಾರಿ  
 1) ಇತಿಹಾಸ 2) ರಾಜ್ಯಶಾಸ್ತ್ರ 3) ಭೂಗೋಳ 4) ಸಮಾಜಶಾಸ್ತ್ರ
- 44) "ವೀಕ್ಷಿಸುವನು" ಈ ಉದ್ದೇಶದ ನಿರ್ದಿಷ್ಟವಾಗಿ  
 1) ಜ್ಞಾನ 2) ಅನ್ವಯ 3) ಕೌಶಲ 4) ಆಸಕ್ತಿ
- 45) ಸಾಹಿತ್ಯ ಆಧಾರಕ್ಕೆ ಇದು ಉದಾಹರಣೆ ಅಲ್ಲ  
 1) ಆರ್ಯಭಟ್ಟಿಯಂ 2) ಅಭಿಜ್ಞಾನಶಾಕುಂತಲ 3) ರಾಜತರಂಗಿಣಿ 4) ಗಿರ್‌ನಾರ್

### PART - IV MATHEMATICS

46. Which of the following is not a quadratic Equation?  
 1)  $(x-2)^2 + 1 = 2n - 3$  3)  $x(x=1) + 8 = (x+2)(x-2)$   
 2)  $x(2n + 3) = x^2 + 1$  4)  $(x+2)^3 = x^3 - 4$

20. Two words have identical sound and spelling, but not related in meaning it is known as.....

1. polysemy                      2. homophone                      3. homonymy                      4. Homograph

**PART – III**  
**CHILD DEVELOPMENT AND PEDEGOGY**

21. ಸಾಮಾನ್ಯ ಸಂಭವನೀಯತೆ ವಕ್ರರೇಖೆಯಲ್ಲಿ ಗರಿಷ್ಠ ಆವೃತ್ತಿಗಳು ಇಲ್ಲಿ ಬರುತ್ತದೆ  
1) ವಕ್ರರೇಖೆಯ ಮಧ್ಯಭಾಗ    2) ವಕ್ರರೇಖೆಯ ಕೆಳತುದಿ    3) ವಕ್ರರೇಖೆಯ ಮೇಲ್ತುದಿ    4) ನಮನಾಗಿ ವಿತರಣೆ
22. ಪೌಖಿಕವಲ್ಲದ ಪರೀಕ್ಷೆಗೊಂದು ಉದಾಹರಣೆ  
1) ಅಹುಜಾ ಸಾಮೂಹಿಕ ಬುದ್ಧಿ ಪರೀಕ್ಷೆ                      3) ಓಟಸ್ ಪರೀಕ್ಷೆ  
2) ಅಲೆಗ್ಸಾಂಡರ್ ಪಾಸ್ ಅಲಾಂಗ್ ಪರೀಕ್ಷೆ                      4) ರೇವನ್‌ರವರ ಪ್ಲೋಗ್ರೆಸಿವ್ ಮ್ಯಾಟ್ರಿಸಸ್ ಪರೀಕ್ಷೆ
23. ID ಈ ತತ್ವದ ಅನುಸಾರ ಕಾರ್ಯನಿರ್ವಹಿಸುತ್ತದೆ  
1) ನ್ಯಾಯನಿರ್ಣಯ                      2) ನೈತಿಕತೆ                      3) ಸಂತೋಷ                      4) ವಾಸ್ತವಿಕತೆ
24. ಗಿಲ್ಫರ್ಡನ ಬುದ್ಧಿಶಕ್ತಿ ಸಂರಚನಾ ಸಿದ್ಧಾಂತದಲ್ಲಿ ನಿರ್ದಿಷ್ಟಪಡಿಸಿದ  
1) ವಿಷಯ                      2) ಫಲ                      3) ಕಾರ್ಯವಿಧಾನ                      4) ಮೂರು ಆಯಾಮಗಳು
25. ಕೆಳಗಿನವುಗಳಲ್ಲಿ ಯಾವ ಮಗು ಸೃಜನ ಶೀಲವೆಂದು ಪರಿಗಣಿತವಾಗುತ್ತದೆ.  
1) ಚಿತ್ರ ರಚನೆ ಮತ್ತು ವರ್ಣ ಚಿತ್ರ ರಚನೆಯಲ್ಲಿ ಪ್ರತಿಭಾನ್ವಿತ ಮಗು  
2) ಅತ್ಯಧಿಕ ಬುದ್ಧಿಶಕ್ತಿಯುಳ್ಳ ಮಗು  
3) ಪರೀಕ್ಷೆಗಳಲ್ಲೂ ನಿರಂತರವಾಗಿ ಉತ್ತಮ ಅಂಕಗಳಿಸುವ ಮಗು  
4) ಪರ್ಯಾಯ ಆಲೋಚನೆ ಮತ್ತು ಸಮಸ್ಯಾ ಪರಿಹಾರದಲ್ಲೂ ಉತ್ತಮ ಸಾಮರ್ಥ್ಯ ಹೊಂದಿರುವ ಮಗ
26. ಬೆಳವಣಿಗೆ ಮತ್ತು ವಿಕಾಸದ ನಡುವಿನ ವ್ಯತ್ಯಾಸವೆಂದರೆ  
1) ಬೆಳವಣಿಗೆ ಒಂದು ನಿರಂತರ ಪ್ರಕ್ರಿಯೆ ಆದರೆ ವಿಕಾಸ ನಿರಂತರ ಪ್ರಕ್ರಿಯೆ ಅಲ್ಲ  
2) ವಿಕಾಸ ಒಂದು ನಿರಂತರ ಪ್ರಕ್ರಿಯೆ ಆದರೆ ಬೆಳವಣಿಗೆ ನಿರಂತರ ಪ್ರಕ್ರಿಯೆ ಅಲ್ಲ  
3) ವಿಕಾಸ ಬೆಳವಣಿಗೆ ಎರಡೂ ನಿರಂತರ ಪ್ರಕ್ರಿಯೆಗಳು  
4) ಮೇಲಿನ ಯಾವುದೂ ಅಲ್ಲ
27. ಒಂದು ವೇಳೆ ವಿದ್ಯಾರ್ಥಿಗಳು ಪಾಠ ನಡೆಸುತ್ತಿರುವಾಗ ಮೇಲಿಂದ ಮೇಲೆ ತಪ್ಪುಗಳನ್ನು ಎಸಗುತ್ತಿದ್ದರೆ ಆಗ ಶಿಕ್ಷಕರು  
1) ತಾತ್ಕಾಲಿಕವಾಗಿ ಆ ಪಾಠ ಬಿಟ್ಟು ನಂತರ ಮತ್ತೆ ಪಾಠಕ್ಕೆ ಮರಳುವುದು.  
2) ತಪ್ಪು ಮಾಡುತ್ತಿರುವ ವಿದ್ಯಾರ್ಥಿಗಳನ್ನು ಗುರ್ತಿಸಿ ಅವರ ಬಗ್ಗೆ ಮುಖ್ಯೋಪಾಧ್ಯಾಯರಲ್ಲಿ ಹೇಳುವುದು  
3) ತಪ್ಪು ಮಾಡುತ್ತಿರುವ ವಿದ್ಯಾರ್ಥಿಗಳನ್ನು ತರಗತಿಯಿಂದ ಹೊರಗೆ ನಿಲ್ಲುವಂತೆ ಮಾಡುವುದು  
4) ಬೋಧನಾ ವಿಧಾನದಲ್ಲಿ ಕಾರ್ಯಗಳಲ್ಲಿ ವೇಳಾಪಟ್ಟಿ ಅಥವಾ ಆಸನ ವ್ಯವಸ್ಥೆಯಲ್ಲಿ ಬದಲಾವಣೆ ಮಾಡುವುದು
28. "ಆಲೋಚನೆ ಭಾಷೆಯನ್ನು ನಿರ್ಧರಿಸುವುದಲ್ಲದೆ ಅದನ್ನು ಹಿಂಬಾಲಿಸುತ್ತದೆ ಈ ವಿಚಾರವು ಕೆಳಗಿನ ಯಾರಿಂದ ನೀಡಲ್ಪಟ್ಟಿತು  
1) ಜೇನ್ ಒಯಾಜೆ                      2) ಲಿವ್ ವೈ ಗೋಟ್‌ಸ್ಟೀ                      3) ಕೊಹ್ಲಬರ್ಗ್                      4) ಬಂಡೂರ
29. ಪುನರ್ಮಲನ/ ಪುನರ್ಬಲನ (Reinforcement) ತತ್ವ ಯಾರಿಗೆ ಸಂಬಂಧಿಸಿದ್ದು  
1) ಪಾವ್‌ಲೋವ್                      2) ಥಾರ್ನ್‌ಡೈಕ್ಸ್                      3) ಸ್ಕಿನರ್                      4) ಮಾರ್ಷ್ಲೆ
30. A, B ಮತ್ತು C ಎಂಬ ಮೂರು ವಿದ್ಯಾರ್ಥಿಗಳು ಕಂಪ್ಯೂಟರ್ ವಿಷಯವನ್ನು ಅಭ್ಯಾಸಿಸುತ್ತಿದ್ದಾರೆ. A ಯು ಅದನ್ನು ಆಸಕ್ತಿದಾಯಕವೆಂದೂ ಭವಿಷ್ಯದಲ್ಲಿ ಅದು ತುಂಬಾ ಉಪಯುಕ್ತವೆಂದು ಯೋಚಿಸುತ್ತಾಳೆ. B ಯು ತರಗತಿಗೆ ಪ್ರಥಮ ರ್ಯಾಂಕ್ ಗಳಿಸುವ ಬೇಡಿಕೆಗಾಗಿ ಕಂಪ್ಯೂಟರ್‌ನ್ನು ಅಭ್ಯಾಸಿಸುತ್ತಾಳೆ. C ಯು ಪ್ರಾಥಮಿಕವಾಗಿ ಕಂಪ್ಯೂಟರ್‌ನಲ್ಲೂ ಉತ್ತೀರ್ಣಗೊಳ್ಳಬೇಕೆಂದು ಅಭ್ಯಾಸಿಸುತ್ತಾಳೆ. ಇಲ್ಲಿ A, B ಮತ್ತು C ಯು ಗುರಿಗಳು ಕ್ರಮವಾಗಿ  
1) ಸಾಧನ, ಪಲಾಯನ ವಿಧಾನ, ಪ್ರಭುತ್ವ                      2) ಪಲಾಯನ ವಿಧಾನ, ಪ್ರಭುತ್ವ, ಸಾಧನ  
3) ಪ್ರಭುತ್ವ, ಪಲಾಯನ ವಿಧಾನ, ಸಾಧನ                      4) ಪ್ರಭುತ್ವ, ಸಾಧನ, ಪಲಾಯನ ವಿಧಾನ
31. ತರಗತಿಯಲ್ಲಿ ಮೂವರು ಪೋಲಿಯೋ ಪೀಡಿತ ಮಕ್ಕಳಿದ್ದಾರೆ ಆಟದ ಅವಧಿಯಲ್ಲಿ ಅವರು  
1) ಆ ಮಕ್ಕಳು ಒಂದು ಮೂಲೆಯಲ್ಲಿ ಕುಳಿತು ಆಟವನ್ನು ಮಿಷಿ ಪಡಬಹುದು  
2) ಇತರ ಮಕ್ಕಳೊಂದಿಗೆ ಅವರಿಗೆ ಸೂಕ್ತವಾದ ಆಟದಲ್ಲಿ ತೊಡಗಿಸಿಕೊಳ್ಳಲು ಪ್ರೋತ್ಸಾಹಿಸುವುದು  
3) ಒಳಾಂಗಣ ಆಟಗಳಲ್ಲಿ ಮಾತ್ರ ಪಾಲ್ಗೊಳ್ಳಲು ಅವಕಾಶ ನೀಡುವುದು  
4) ತರಗತಿಯ ಎಲ್ಲ ಮಕ್ಕಳೊಂದಿಗೆ ಆಟವಾಡುವಂತೆ ಒತ್ತಾಯಿಸುವುದು
32. ಕೊಹ್ಲಬರ್ಗ್‌ರವರ ಪ್ರಕಾರ ಮಕ್ಕಳು ಸರಿ ಮತ್ತು ತಪ್ಪುಗಳ ಕುರಿತು ಆಲೋಚಿಸಲು ಯತ್ನಿಸುವುದು  
1) ವಿಭಿನ್ನ ವಯಸ್ಸಿನಲ್ಲಿ ವಿಭಿನ್ನವಾಗಿರುತ್ತದೆ                      2) ವಿಭಿನ್ನ ಹಂತದಲ್ಲಿಯೂ ಒಂದೇ ವಿನಾಸ ಹೊಂದಿರುತ್ತದೆ  
3) ಸಂದರ್ಭಾನುಸಾರವಾಗಿರುತ್ತದೆ                      4) ಪಾಲಕರು ನೀಡಿದ ಸೂಚನೆಗೆ ಅನುಸಾರವಾಗಿರುತ್ತದೆ

**PART – II**  
**ENGLISH LANGUAGE**

**Read the following passage and choose the most appropriate answer to the question:**

To someone who had only a paper knowledge of India. It might seem that India women were the best off in the world. We have the vote, we have the right of abortion, and we have practically everything else in between. The Special Marriage contract possible to imagine. In actual fact, only a fraction of the women get the advantage of its liberal provisions, prominent among the exceptions being Muslim women. Perhaps, some day, the live facts to a woman's position will catch up with the paper position.

Meanwhile many women's organizations are hinting that the Government ought to think of giving us women a special gift, which is equal pay for equal work. But we want the Government to give us another present, which will reach every single woman in the country. We want an era of easy house-keeping.

**11. One can conclude from the passage that**

1. Indian women are better off in the world.
2. A lot of privileges on paper have not been translated into reality.
3. Indian women do not know how to enjoy benefits.
4. Indian women have no access to their privileges.

**12. From the information given in the passage, one can say that.**

1. The special Marriages Act has benefited only Hindu women.
2. Women have a long way to go, as far as privileges are concerned.
3. Muslim women, by far, have benefited the least from the Privileges.
4. The Special Marriages Act requires modifications.

**13. Equal pay for equal work Means**

1. Payment on par with men
2. Same amount of work as men
3. All women to be paid equally
4. All women to be allotted the same kind of work that men do.

**14. The writer feels that an era of easy housekeeping would reach every woman because**

1. Working women do not work at home
2. It would specially help Muslim women
3. It would help women not to marry
4. No woman is usually exempted from housekeeping.

**15. The writer's intention in this passage seems to be to.**

1. Sympathise with the plight of women
2. Show the injustice meted out to Muslim women
3. Show which privilege would really ease women's lives
4. Present arguments for equal payment for women.

**Directions: Answer the following questions (Q. Nos. 16 to 20) by selecting the correct/most appropriate options.**

**16. Positive interference is a kind of .....**

1. Native language
2. Target language
3. Foreign language
4. Pictorial language

**17. In learning the new language, multilingualism is.....**

1. a burden
2. a methodology
3. an asset
4. an interference

**18. Note taking is done.....**

1. while writing an essay
2. during a lecture
3. while reading a review
4. during extensive reference work

**19. The method of teaching foreign language without using the Pupil's first language is.....**

1. Old method
2. Direct method
3. Classical method
4. Grammar-translation method

**JSS INSTITUTE OF EDUCATION, SAKALESHPUR**  
**TEACHER PLACEMENT COMMON ENTRANCE TEST**  
Time- 1 hrs 30 Minutes 19<sup>th</sup> MAY- 2023 Max Marks – 60

**Instruction:-**

1. All the 60 questions are compulsory and carry equal marks.
2. Before opening the booklet, take the OMR sheet kept inside the question paper carefully and write your name, URICMS No and signature in the place provided in the OMR.
3. Each question is followed by four answers, of which only one is complete and most correct. Please mark the answer which you feel is most correct and complete by fully darkening the oval of that answer in the OMR Sheet.
4. So go ahead. Best of luck.

**PART – I**

**ಕನ್ನಡ / KANNADA**

1. ಒಂದು ಭಾಷೆಯನ್ನು ಕಲಿಯ ಬೇಕಾದರೆ ಮೊದಲು ನಾವು  
(1) ಭಾಷೆಯ ಅಕ್ಷರಗಳನ್ನು ಗುರುತಿಸುವಂತಾಗಬಾಕು (2) ಭಾಷೆಯ ವ್ಯಾಕರಣವನ್ನು ಕಲಿತರಬೇಕು  
(3) ಭಾಷೆಯನ್ನಾಡುವ ಜನರ ನಡುವೆ ನಾವು ವಾಸಿಸಬೇಕು (4) ಭಾಷೆಯ ಧ್ವನಿಗಳನ್ನು ಗುರುತಿಸುವಂತಾಗಬೇಕು
2. ಕುರುಕ್ಷೇತ್ರದಲ್ಲಿ ಕೌರವರು ಪಾಂಡವರೊಡನೆ ಯುದ್ಧ ಮಾಡಿ ಸರ್ವನಾಶ ಹೊಂದಿದರು ಗೆರೆ ಎಳೆದ ಪದದ ಅರ್ಥಕೊಡುವ ನುಡಿಗಟ್ಟು  
(1) ಮೂಗಿನ ತುದಿಗೆ ಸುಣ್ಣ ಹಚ್ಚು (3) ಶಸ್ತ್ರ ನೆಲಕ್ಕೆ ಹಾಕು  
(2) ಏಳು ಹನ್ನೊಂದಾಗು (4) ನೆಲಸಮ ಮಾಡು
3. ಭಾಷಾ ಬೋಧನೆಯ ಪ್ರಧಾನ ಉದ್ದೇಶ  
(1) ಲಿಖಿತ ಅಭಿವ್ಯಕ್ತಿ ಸಾಮರ್ಥ್ಯ ಬೆಳೆಸುವುದು (3) ಮೌಖಿಕ & ಲಿಖಿತ ಅನುಕರಣಾ ತತ್ವ  
(2) ಮೌಖಿಕ ಅಭಿವ್ಯಕ್ತಿ ಸಾಮರ್ಥ್ಯ ಬೆಳೆಸುವುದು (4) ಆಲಿಸುವ ಮಾತನಾಡುವ ಸಾಮರ್ಥ್ಯ ಬೆಳೆಸುವುದು
4. ಭಾಷಾ ಕಲಿಕೆಯ ಆರಂಭ & ಅದು ಬಲಗೊಳ್ಳುವುದು ಅನುಕ್ರಮವಾಗಿ ಭಾಷಾ ಬೋಧನೆಯ ಈ ತತ್ವಗಳಿಂದ  
(1) ಸಿದ್ಧತಾ ತತ್ವ ಅಭ್ಯಾಸ ತತ್ವ (3) ಸಿದ್ಧತಾ ತತ್ವ ಅನುಕರಣಾ ತತ್ವ  
(2) ಅನುಕರಣಾ ತತ್ವ ಪುನರ್ಬಲನ ತತ್ವ (4) ಅನುಕರಣಾ ತತ್ವ ಅಭ್ಯಾಸ ತತ್ವ
5. ಈ ಹೇಳಿಕೆಗಳಲ್ಲಿ ಉತ್ತಮ ಮಾತುಗಾರಿಕೆಯ ಪ್ರಮುಖ ಲಕ್ಷಣಗಳು  
(a) ಸ್ಪಷ್ಟವಾದ ಉಚ್ಚಾರಣೆಯಿಂದಿಗೆ ಸರಾಗವಾಗಿ ಮಾತನಾಡುವುದು  
(b) ಮಾತಿನ ಧಾಟಿಯಲ್ಲಿ ವಿರಳತೆಯಿಂದಿಗೆ ಮಾತನಾಡುವುದು  
(c) ಭಾಷಾಪೂರ್ಣವಾಗಿ ಏಕಸಾನತೆಯಿಂದ ಮಾತನಾಡುವುದು  
(d) ಅರ್ಥಪೂರ್ಣವಾಗಿ ವ್ಯಾಕರಣಬದ್ಧವಾಗಿ ಮಾತನಾಡುವುದು  
(1) a, b & d (2) a, c & d (3) b, c & d (4) a, b & c
6. ಭಾಷಾ ಕಲಿಕೆಯಲ್ಲಿ ನೈಸರ್ಗಿಕ ಸಾಧನಗಳು ಈ ರೀತಿಯ ಕಲಿಕೆಯ ಸ್ಪಷ್ಟತೆ & ಪರಿಪೂರ್ಣತೆಯನ್ನು ಒದಗಿಸಬಹುದು.  
(1) ಸ್ವಯಂ ಕಲಿಕೆ (2) ಗುಂಪು ಕಲಿಕೆ (3) ಸಂಘಟನೆ ಕಲಿಕೆ (4) ಸಾಂಧರ್ಭಿಕ ಕಲಿಕೆ
7. ಭಾಷಾ ಪ್ರಯೋಗಾಲಯವು ಭಾಷಾ ಅಕ್ಷರದಲ್ಲಿ ಈ ರೀತಿ ನೆರವಾಗುತ್ತದೆ  
(1) ವ್ಯಾಕರಣಬದ್ಧವಾಗಿ ಭಾಷೆಯನ್ನು ಕಲಿಯಲು  
(2) ಅಂತರ್ಜಾಲ ನೆರವಿನಿಂದ ಭಾಷೆಯನ್ನು ಕಲಿಯಲು  
(3) ಭಾಷೆಯನ್ನು ಶಾಸ್ತ್ರೀಯ ಕ್ರಮದಲ್ಲಿ ಪ್ರಯೋಗಿಸಲು  
(4) ಸೂಕ್ತ ಅಭ್ಯಾಸಗಳ ಮೂಲಕ ಭಾಷಾ ದೋಷಗಳನ್ನು ಪರಿಹರಿಸಿಕೊಳ್ಳಲು
8. ಓದುವ ಪರಿಹಾರಾತ್ಮಕ ಕಾರ್ಯದಲ್ಲಿ ಈ ರೀತಿಯಾದ ಪರಿಹಾರಾತ್ಮಕ ಚಟುವಟಿಕೆಯನ್ನು ನಡೆಸುವುದು ಹೆಚ್ಚು ಸೂಕ್ತ  
(1) ವಿಶೇಷ ತರಗತಿ, ತರಗತಿ ಶಿಕ್ಷಕರಿಂದ, ತರಗತಿಯ ಎಲ್ಲ ವಿದ್ಯಾರ್ಥಿಗಳಿಗೆ  
(2) ವಿಶೇಷ ತರಗತಿ, ವಿಶೇಷ ಶಿಕ್ಷಕರಿಂದ ಓದುಗಾರಿಕೆಯಲ್ಲಿ ಹಿಂದುಳಿದ ವಿದ್ಯಾರ್ಥಿಗಳಿಗೆ  
(3) ವಿಶೇಷ ತರಗತಿ, ವಿಶೇಷ ಶಿಕ್ಷಕರಿಂದ ಕಲಿಕೆಯಲ್ಲಿ ಹಿಂದುಳಿದ ವಿದ್ಯಾರ್ಥಿಗಳಿಗೆ  
(4) ಸಾಮಾನ್ಯ ತರಗತಿ, ತರಗತಿ ಶಿಕ್ಷಕರಿಂದ ಓದುಗಾರಿಕೆಯಲ್ಲಿ ಹಿಂದುಳಿದ ವಿದ್ಯಾರ್ಥಿಗಳಿಗೆ
9. ಭಾಷಾ ಕಲಿಕೆ ಭಾಗಶಃ ಹುಟ್ಟಿನಿಂದ ಬಂದುದು ಇದನ್ನು ಯಾರು ಹೇಳಿದರು?  
(1) ನೋಮ್ ಚೊಮ್ಸ್ಕಿ (2) ಸ್ಕೂಬಿನ್ (3) ಗೋಡ್ಡನ್ (4) ದೃಷ್ಟಾಂತಾಲಂಕಾರ
10. “ಪುರದ ಪುಣ್ಯಂ ಪುರುಷರೂಪಿಂದ ಪೊಗುತಿದೆ” ಇದು ಯಾವ ಅಲಂಕಾರಕ್ಕೆ ಉದಾಹರಣೆಯಾಗಿದೆ.  
(1) ದೀಪಕಾಲಂಕಾರ (2) ರೂಪಕಾಲಂಕಾರ (3) ಉಪಮಾಲಂಕಾರ (4) ದೃಷ್ಟಾಂತಾಲಂಕಾರ

47. Out of 25 Students participating in a debate 8 are girls. The probability that the winner is a boy is  
 1) 17/25      2) 17/33      3) 8/25      4) 8/33
48. The number of lines of symmetry in a square is  
 1) 4      2) 3      3) 2      4) Infinite
49. The LCM of the least positive prime number and the least positive composite number is  
 1) 4      2) 3      3) 2      4) 1
50. An athletic won 8 events out of a number events. If the win percentage was 40, the number of events in total is  
 1) 10      2) 15      3) 20      4) 5

**PART - V**  
**SCIENCE**

51. .... Should be present in the water for metamorphosis of tadpoles.  
 1) Chlorine      2) Carbon      3) Sculpture      4) Iodine
52. Is listen to the sound of lightening 10 sec. after observing its how far are we from the place where lightening occurs? (Sound speed =330 m/s)  
 1) 825m      2) 1650m      3) 3300m      4) 330m
53. Which of the following is a greenhouse gas.  
 1) Nitrogen      2) Oxygen      3) Chlorine      4. Water Vapors
54. Polycot is obtained by Mixing.  
 1) Nylon and wool      2) Polyester and wool  
 3) Nylon and Cotton      4) Polyester and cotton.
55. .... is meant for conservation of biodiversity in their natural habitat.  
 1) Wild wit sanctuaries      2) Zoological garden  
 3) Botanical garden      4) Dams

**PART - VI**  
**INFORMATION AND COMMUNICATION**

56. ICT refers to all the methods, tools, concepts related to  
 1) Storing digital information      2) recording digital information  
 3) Sending digital information      4) All of the above
57. Which of the following is/are examples of software?  
 1) MS Word      2) MS Excel      3) Open Office Calc      4) All of the above
58. Which of the following are mobile operating system?  
 1) Apple iOS      2) Android      3) Both of the above      4. None of the above
59. We need to protect our computer from \_\_\_\_\_  
 1) Air      2) Dust  
 3) Both of the above      4) None of the above
60. Unwanted mails are called \_\_\_\_\_  
 1) A-SPAM      2) SPAM      3) SPAM      4) N-SPAM



# JSS INSTITUTE OF EDUCATION

Kowdalli, Sakleshpur Tq, Hassan Dist

SUBJECT : Mock CET March-2019

## STUDENT ANSWER SHEET WITH QUESTION PAPER

Student Name	N	A	V	E	E	N	H	B											
--------------	---	---	---	---	---	---	---	---	--	--	--	--	--	--	--	--	--	--	--

STUDENT REGISTER NO : ED182724

TOTAL MARKS: 60

Time : 75 Minutes

(Mental Ability, General English, Educational Psychology, General Knowledge and Computer Education)

1	a b c d	16	a c d	31	a c d	46	a b d
2	a b d	17	a c d	32	b c d	47	b c d
3	b c d	18	a b c d	33	a b c d	48	a b d
4	a c d	19	a b d	34	a c d	49	b c d
5	b c d	20	a c d	35	b c d	50	a b d
6	a c d	21	a b d	36	a b d	51	a b c d
7	b c d	22	b c d	37	a b d	52	a b c d
8	a b d	23	a c d	38	b c d	53	b c d
9	a b d	24	a b d	39	a b d	54	a b c d
10	a c d	25	a b c d	40	b c d	55	a c d
11	a c d	26	b c d	41	a b c d	56	a c d
12	b c d	27	a c d	42	a b d	57	a b c d
13	a b d	28	a b d	43	a c d	58	a b d
14	a b c d	29	b c d	44	a c d	59	b c d
15	b c d	30	b c d	45	a b c d	60	b c d

Total Marks Obtained: 25

Reduced to 10: —

Invigilator Signature

*[Handwritten Signature]*  
1-6-19

*[Handwritten Signature]*  
Candidate Signature

## GENERAL KNOWLEDGE

1. The 2014 Hockey World Cup tournament was held in
    - (1) London
    - (2) Australia
    - (3) India
    - (4) The Hague
  2. National Pension Scheme (NPS) was introduced by Government of India in
    - (1) 2006
    - (2) 2010
    - (3) 2009
    - (4) 2004
  3. The recipient of 2009 Nobel Peace Award is
    - (1) Barak Obama
    - (2) Wangeri Mathaai
    - (3) Kailash Satyarthi
    - (4) Shirin Ebadi
  4. The most irrigated state in India is
    - (1) Bihar
    - (2) Punjab
    - (3) Andhra Pradesh
    - (4) Uttar Pradesh
  5. One of the following youngest persons is elected as MP in 2014 general body Lok Sabha election
    - (1) Pratap Simha
    - (2) Heena Gavit
    - (3) Sachin Pilot
    - (4) Priyanka Gandhi
1. 2014 ರ ವಿಶ್ವಕಪ್ ಹಾಕಿ ಪಂದ್ಯಾವಳಿ ನಡೆದ ಸ್ಥಳ
    - (1) ಲಂಡನ್
    - (2) ಆಸ್ಟ್ರೇಲಿಯಾ
    - (3) ಭಾರತ
    - (4) ದಿ ಹೇಗ್
  2. ಭಾರತ ಸರ್ಕಾರವು 'ನ್ಯಾಷನಲ್ ಪೆನ್ಷನ್ ಸ್ಕೀಂ' ಜಾರಿಗೆ ತಂದ ವರ್ಷ
    - (1) 2006
    - (2) 2010
    - (3) 2009
    - (4) 2004
  3. 2009 ರ ನೊಬೆಲ್ ಶಾಂತಿ ಪ್ರಶಸ್ತಿ ಪಡೆದವರು
    - (1) ಬರಾಕ್ ಒಬಾಮಾ
    - (2) ವಾಂಗೇರಿ ಮಾತಾಯಿ
    - (3) ಕೈಲಾಶ್ ಸತ್ಯಾರ್ಥಿ
    - (4) ಶಿರಿನ್ ಎಬಾದಿ
  4. ಭಾರತದಲ್ಲಿ ಅತಿ ಹೆಚ್ಚು ನೀರಾವರಿ ಪ್ರದೇಶ ಹೊಂದಿರುವ ರಾಜ್ಯ
    - (1) ಬಿಹಾರ
    - (2) ಪಂಜಾಬ್
    - (3) ಆಂಧ್ರ ಪ್ರದೇಶ
    - (4) ಉತ್ತರ ಪ್ರದೇಶ
  5. ಈ ಕೆಳಗಿನ ಒಬ್ಬರು 2014 ರ ಲೋಕಸಭಾ ಚುನಾವಣೆಯಲ್ಲಿ ಅತ್ಯಂತ ಕಿರಿಯ ವಯಸ್ಸಿನ ಲೋಕಸಭಾ ಸದಸ್ಯರಾಗಿ ಆಯ್ಕೆಯಾಗಿದ್ದಾರೆ
    - (1) ಪ್ರತಾಪ್ ಸಿಂಹಾ
    - (2) ಹೀನಾ ಗವಿತ್
    - (3) ಸಚಿನ್ ಪೈಲಟ್
    - (4) ಪ್ರಿಯಾಂಕಾ ಗಾಂಧಿ

6. Under the Article 331, how many members of the Anglo-Indian community can be nominated in Lok Sabha by the President ?

- (1) 3
- (2) 4
- (3) 2
- (4) 1

7. One of the following gasses is used for refrigeration :

- (1) Chlorine
- (2) Sulphur dioxide
- (3) Phosphine
- (4) Ammonia

8. If the President wants to resign, he should address his resignation letter to the

- (1) Parliament
- (2) Prime Minister
- (3) Chief Justice of India
- (4) Vice President

9. One of the following Articles of Indian Constitution says, 'No child below the age of fourteen years shall be employed to work in any factory or mine or engaged in any other hazardous employment' :

- (1) Article 45
- (2) Article 330
- (3) Article 24
- (4) Article 368

6. ಸಂವಿಧಾನದ 331 ನೇ ವಿಧಿಯ ಪ್ರಕಾರ ರಾಷ್ಟ್ರಪತಿಯು ಎಷ್ಟು ಸಂಖ್ಯೆಯ ಆಂಗ್ಲ-ಭಾರತಿಯರನ್ನು ಲೋಕಸಭೆಗೆ ಸದಸ್ಯರನ್ನಾಗಿ ಮಾಡುವ ಅವಕಾಶ ಕಲ್ಪಿಸಿದೆ ?

- (1) 3
- (2) 4
- (3) 2
- (4) 1

7. ಈ ಕೆಳಗಿನ ಒಂದು ಅನಿಲವನ್ನು ಶೈತ್ಯೀಕರಣದಲ್ಲಿ ಬಳಸುವರು

- (1) ಕ್ಲೋರಿನ್
- (2) ಗಂಧಕದ ಡೈಆಕ್ಸೈಡ್
- (3) ಫಾಸ್ಫೀನ್
- (4) ಅಮೋನಿಯಾ

8. ರಾಷ್ಟ್ರಪತಿಯು ರಾಜೀನಾಮೆ ನೀಡಲು ಬಯಸಿದರೆ, ಅವರು ಈ ಕೆಳಗಿನ ವಿಳಾಸಕ್ಕೆ ರಾಜೀನಾಮೆ ಪತ್ರವನ್ನು ಕೊಡಬೇಕಾಗಿರುತ್ತದೆ

- (1) ಸಂಸತ್ತು
- (2) ಪ್ರಧಾನಮಂತ್ರಿ
- (3) ಭಾರತದ ಮುಖ್ಯ ನ್ಯಾಯಾಧೀಶರು
- (4) ಉಪರಾಷ್ಟ್ರಪತಿ

9. ಭಾರತ ಸಂವಿಧಾನದ ಈ ಕೆಳಗಿನ ವಿಧಿಯು 14 ವರ್ಷಕ್ಕಿಂತ ಕಡಿಮೆ ವಯಸ್ಸಿನ ಮಕ್ಕಳು ಯಾವುದೇ ಕಾರ್ಖಾನೆ ಅಥವಾ ಗಣಿ ಅಥವಾ ಅಪಾಯಕಾರಿ ಉದ್ಯೋಗದಲ್ಲಿ ತೊಡಗುವಂತಿಲ್ಲ ಎಂದು ತಿಳಿಸಿದೆ.

- (1) 45 ನೇ ವಿಧಿ
- (2) 330 ನೇ ವಿಧಿ
- (3) 24 ನೇ ವಿಧಿ
- (4) 368 ನೇ ವಿಧಿ



10. Gerontology is the study of

- (1) Process of ageing
- (2) Growth of the cells
- (3) Birds
- (4) Vegetables

11. Helium is used for respiration in deep water instead of nitrogen because

- (1) it is heavier than nitrogen.
- (2) it is lighter than nitrogen.
- (3) it mixes less in blood than nitrogen.
- (4) it helps oxygen burn more quickly.

12. The personality who is not connected with 1857 mutiny

- (1) Bhagat Singh
- (2) Lakshmi Bai
- (3) Tantia Tope
- (4) Nana Sahib

10. ಗೆರಂಟೋಲಜಿ ಈ ಅಧ್ಯಯನಕ್ಕೆ ಸಂಬಂಧಿಸಿದೆ

- (1) ವಯಸ್ಸಾಗುವಿಕೆ
- (2) ಜೀವಕೋಶಗಳ ಬೆಳವಣಿಗೆ
- (3) ಪಕ್ಷಿಗಳು
- (4) ತರಕಾರಿಗಳು

11. ಸಾಗರದ ತಳಭಾಗದಲ್ಲಿ ಉಸಿರಾಟ ಮಾಡಲು ಸಾರಜನಕದ ಬದಲಿಗೆ ಹೀಲಿಯಂ ಅನಿಲವನ್ನು ಬಳಸುವರು. ಇದಕ್ಕೆ ಕಾರಣ

- (1) ಇದು ಸಾರಜನಕಕ್ಕಿಂತ ಹೆಚ್ಚು ಭಾರವಿದೆ
- (2) ಇದು ಸಾರಜನಕಕ್ಕಿಂತ ಹೆಚ್ಚು ಹಗುರವಿದೆ
- (3) ಇದು ರಕ್ತದಲ್ಲಿ ಸಾರಜನಕಕ್ಕಿಂತ ಕಡಿಮೆ ಮಿಶ್ರಣವಾಗುತ್ತದೆ
- (4) ಇದು ಆಕ್ಸಿಜನ್‌ನ್ನು ಬೇಗ ದಹಿಸಲು ಸಹಕರಿಸುತ್ತದೆ

12. ಈ ಕೆಳಗಿನ ವ್ಯಕ್ತಿಯು 1857 ರ ದಂಗೆಗೆ ಸಂಬಂಧಿಸಿಲ್ಲ

- (1) ಭಗತ್ ಸಿಂಗ್
- (2) ಲಕ್ಷ್ಮೀಬಾಯಿ
- (3) ತಾಂತ್ಯಾ ಟೋಪಿ
- (4) ನಾನಾ ಸಾಹೀಬ್

13. The chemical symbol of the element "Tungsten" is

- (1) T
- (2) Sn
- (3) W
- (4) Tn

14. The hormone which controls excretion of water from kidney is

- (1) Prolactin
- (2) Vasopressin
- (3) Oxytocin
- (4) Adrenalin

15. "The world human rights day" celebrating on

- (1) December 10<sup>th</sup>
- (2) December 23<sup>rd</sup>
- (3) June 21<sup>st</sup>
- (4) October 10<sup>th</sup>

16. The Tata Institute of Fundamental Research (TIFR) is located in

- (1) Bengaluru
- (2) Delhi
- (3) Mumbai
- (4) Kolkata

17. The asteroid belt of solar system present between the planets of

- (1) Earth and Mars
- (2) Mars and Jupiter
- (3) Jupiter and Saturn
- (4) Earth and Venus

13. 'ಟಂಗ್‌ಸ್ಟನ್' ಧಾತುವಿನ ರಾಸಾಯನಿಕ ಸಂಕೇತ

- (1) T
- (2) Sn
- (3) W
- (4) Tn

14. ಮೂತ್ರಜನಕಾಂಗಗಳಲ್ಲಿ ನೀರಿನ ವಿಸರ್ಜನೆಯನ್ನು ನಿಯಂತ್ರಿಸುವ ಹಾರ್ಮೋನು

- (1) ಪ್ರೊಲ್ಯಾಕ್ಟಿನ್
- (2) ವ್ಯಾಸೋಪ್ರೆಸಿನ್
- (3) ಆಕ್ಸಿಟೊಸಿನ್
- (4) ಆಡ್ರಿನಾಲಿನ್

15. "ವಿಶ್ವ ಮಾನವ ಹಕ್ಕುಗಳ ದಿನ" ವನ್ನು ಈ ದಿನದಂದು ಆಚರಿಸುವರು.

- (1) ಡಿಸೆಂಬರ್ 10
- (2) ಡಿಸೆಂಬರ್ 23
- (3) ಜೂನ್ 21
- (4) ಅಕ್ಟೋಬರ್ 10

16. ಟಾಟಾ ಇನ್‌ಸ್ಟಿಟ್ಯೂಟ್ ಆಫ್ ಫಂಡಮೆಂಟಲ್ ರಿಸರ್ಚ್ (TIFR) ಕಂಡುಬರುವ ಸ್ಥಳ

- (1) ಬೆಂಗಳೂರು
- (2) ದೆಹಲಿ
- (3) ಮುಂಬೈ
- (4) ಕೋಲ್ಕತ್ತಾ

17. ಸೌರಮಂಡಲದಲ್ಲಿ ಕ್ಷುದ್ರಗ್ರಹಗಳು ಈ ಕೆಳಗಿನ ಗ್ರಹಗಳ ನಡುವೆ ಕಂಡುಬರುತ್ತವೆ

- (1) ಭೂಮಿ ಮತ್ತು ಮಂಗಳ
- (2) ಮಂಗಳ ಮತ್ತು ಗುರು
- (3) ಗುರು ಮತ್ತು ಶನಿ
- (4) ಭೂಮಿ ಮತ್ತು ಶುಕ್ರ

EDUCATIONAL PSYCHOLOGY

18. In Pavlov's experiment on conditioned dog, ringing of bell without food leads to

- (1) extinction
- (2) frustration
- (3) shaping
- (4) reinforcement

19. The correct statement on skills learning is

- (1) Takes long time to learn and less time to forget.
- (2) Takes less time to learn and long time to forget.
- (3) Takes long time to learn and long time to forget.
- (4) Takes less time to learn and less time to forget.

☞ Paper-1

18. ಪಾವ್ಲೋವ್‌ನ ಅನುಬಂಧಿತ ನಾಯಿಯ ಪ್ರಯೋಗದಲ್ಲಿ, ಆಹಾರವನ್ನು ನೀಡದೇ ಗಂಟೆಯನ್ನು ಮಾತ್ರ ಬಾರಿಸಿದಾಗ ಇದು ಉಂಟಾಗುತ್ತದೆ.

- (1) ನಶಿಸುವಿಕೆ
- (2) ಆಶಾಭಂಗ
- (3) ರೂಪಿಸುವಿಕೆ
- (4) ಪುಷ್ಟೀಕರಣ

19. ಕೌಶಲಗಳ ಕಲಿಕೆ ಬಗ್ಗೆ ಸರಿಯಾದ ಹೇಳಿಕೆ ಯಾವುದೆಂದರೆ

- (1) ಕಲಿಯಲು ಹೆಚ್ಚು ಸಮಯ ತೆಗೆದು ಕೊಳ್ಳುತ್ತದೆ ಮತ್ತು ಮರೆಯಲು ಕಡಿಮೆ ಸಮಯ ತೆಗೆದುಕೊಳ್ಳುತ್ತದೆ.
- (2) ಕಲಿಯಲು ಕಡಿಮೆ ಸಮಯ ತೆಗೆದು ಕೊಳ್ಳುತ್ತದೆ ಮತ್ತು ಮರೆಯಲು ಹೆಚ್ಚು ಸಮಯ ತೆಗೆದುಕೊಳ್ಳುತ್ತದೆ.
- (3) ಕಲಿಯಲು ಹೆಚ್ಚು ಸಮಯ ತೆಗೆದು ಕೊಳ್ಳುತ್ತದೆ ಮತ್ತು ಮರೆಯಲು ಹೆಚ್ಚು ಸಮಯ ತೆಗೆದುಕೊಳ್ಳುತ್ತದೆ.
- (4) ಕಲಿಯಲು ಕಡಿಮೆ ಸಮಯ ತೆಗೆದು ಕೊಳ್ಳುತ್ತದೆ ಮತ್ತು ಮರೆಯಲು ಕಡಿಮೆ ಸಮಯ ತೆಗೆದುಕೊಳ್ಳುತ್ತದೆ.

20. The best leader is one who
- (1) draws more members to group.
  - (2) induces all members to make their best contribution.
  - (3) leads the group with his own decision.
  - (4) is physically strong.

21. The IQ of a five year old girl is 120. What is her mental age ?
- (1) 6 years
  - (2) 8 years
  - (3) 4 years
  - (4) 5 years

22. Match the following :
- |                                 |                               |
|---------------------------------|-------------------------------|
| A. Language learning            | i. Insight learning           |
| B. Elephant standing on one leg | ii. Classical conditioning    |
| C. Learning drawing             | iii. Trial and Error learning |
|                                 | iv. Operant conditioning      |

Codes :

- |     | A  | B   | C   |
|-----|----|-----|-----|
| (1) | ii | iv  | iii |
| (2) | ii | i   | iii |
| (3) | ii | iv  | i   |
| (4) | i  | iii | iv  |

23. ಉತ್ತಮ ನಾಯಕ ಯಾರೆಂದರೆ
- (1) ಸಮೂಹಕ್ಕೆ ಹೆಚ್ಚಿನ ಸದಸ್ಯರನ್ನು ಆಕರ್ಷಿಸುವವರು
  - (2) ಗುಂಪಿನ ಎಲ್ಲಾ ಸದಸ್ಯರು ತಮ್ಮ ಗರಿಷ್ಠಮಟ್ಟದ ಕೊಡುಗೆಯನ್ನು ನೀಡುವಂತೆ ಪ್ರೇರೇಪಿಸುವವರು
  - (3) ತನ್ನದೇ ತೀರ್ಮಾನಗಳಿಂದ ಸಮೂಹವನ್ನು ಮುನ್ನಡೆಸುವವರು
  - (4) ದೈಹಿಕವಾಗಿ ಬಲಿಷ್ಠ

24. ಐದು ವರ್ಷ ವಯಸ್ಸಿನ ಒಂದು ಹುಡುಗಿಯ ಬುದ್ಧಿಶಕ್ತಿ ಲಭ್ಯ (I.Q.) 120 ಆಗಿದ್ದರೆ ಆಕೆಯ ಮಾನಸಿಕ ವಯಸ್ಸೆಷ್ಟು ?
- (1) 6 ವರ್ಷ
  - (2) 8 ವರ್ಷ
  - (3) 4 ವರ್ಷ
  - (4) 5 ವರ್ಷ

22. ಹೊಂದಿಸಿ ಬರೆಯಿರಿ.
- |                                     |                              |
|-------------------------------------|------------------------------|
| A. ಭಾಷೆ ಕಲಿಕೆ                       | i. ಒಳನೋಟ ಕಲಿಕೆ               |
| B. ಆನೆಯು ಒಂದೇ ಕಾಲಿನ ಮೇಲೆ ನಿಲ್ಲುವುದು | ii. ಸಾಂಪ್ರದಾಯಿಕ - ಅನುಬಂಧ     |
| C. ಚಿತ್ರಕಲೆ ಕಲಿಯುವುದು               | iii. ಪ್ರಯತ್ನ ಮತ್ತು ದೋಷ ಕಲಿಕೆ |
|                                     | iv. ಕ್ರಿಯಾಜನ್ಯ ಅನುಬಂಧ        |

ಸಂಕೇತಗಳು :

- |     | A  | B   | C   |
|-----|----|-----|-----|
| (1) | ii | iv  | iii |
| (2) | ii | i   | iii |
| (3) | ii | iv  | i   |
| (4) | i  | iii | iv  |

25/7/8

23. A child is using small wooden piece as bus and playing. The child is in which of the following stages of cognitive development ?

- (1) Sensory motor stage
- (2) Pre-operational stage
- (3) Concrete-operations stage
- (4) Formal-operations stage

24. In Normal Probability Curve (NPC) related to distribution of intelligence, gifted children are located at

- (1) the peak of NPC
- (2) both the edges of NPC
- (3) one edge of NPC
- (4) the centre of NPC

25. Which of the following statement related to intelligence is correct ?

- (1) All intelligents are creative.
- (2) All intelligent students face adjustment problem.
- (3) Intelligence is determined by environment.
- (4) Intelligence is the ability to adjust to new environment.

✠ Paper-1

23. ಒಂದು ಮಗು ಮರದ ತುಂಡನ್ನು ಬಸ್ಸಿನಂತೆ ಆಡಲು ಉಪಯೋಗಿಸುತ್ತಿದೆ. ಈ ಮಗುವು ಜ್ಞಾನಾತ್ಮಕ ವಿಕಾಸದ ಯಾವ ಹಂತದಲ್ಲಿದೆ ?

- (1) ಸಂವೇದನಾ ಗತಿಹಂತ
- (2) ಕಾರ್ಯ ಪೂರ್ವಹಂತ
- (3) ಮೂರ್ತಕಾರ್ಯಗಳ ಹಂತ
- (4) ಔಪಚಾರಿಕ ಕಾರ್ಯಗಳ ಹಂತ

24. ಬುದ್ಧಿಶಕ್ತಿ ವಿತರಣೆಯ ಸಾಮಾನ್ಯ ಸಂಭಾವ್ಯತಾ ವಕ್ರರೇಖೆಯಲ್ಲಿ (NPC) ಪ್ರತಿಭಾನ್ವಿತರನ್ನು ಸೂಚಿಸುವ ಸ್ಥಳ

- (1) NPC ಯ ಉತ್ತುಂಗದಲ್ಲಿ
- (2) NPC ಯ ಎರಡೂ ಬದಿಗಳಲ್ಲಿ
- (3) NPC ಯ ಒಂದು ಬದಿಯಲ್ಲಿ
- (4) NPC ಯ ಮಧ್ಯಭಾಗದಲ್ಲಿ

25. ಬುದ್ಧಿಶಕ್ತಿಗೆ ಸಂಬಂಧಿಸಿದಂತೆ ಈ ಕೆಳಗಿನ ಯಾವ ಹೇಳಿಕೆ ಸರಿ ?

- (1) ಎಲ್ಲಾ ಬುದ್ಧಿವಂತರೂ ಸೃಜನಶೀಲರು.
- (2) ಎಲ್ಲಾ ಬುದ್ಧಿವಂತ ವಿದ್ಯಾರ್ಥಿಗಳೂ ಹೊಂದಾಣಿಕೆ ಸಮಸ್ಯೆ ಎದುರಿಸುತ್ತಾರೆ.
- (3) ಬುದ್ಧಿಶಕ್ತಿಯನ್ನು ಪರಿಸರ ನಿರ್ಧರಿಸುತ್ತದೆ.
- (4) ಹೊಸ ಪರಿಸರಕ್ಕೆ ಹೊಂದಾಣಿಕೆ ಯಾಗಲು ಸಾಮರ್ಥ್ಯವೇ ಬುದ್ಧಿಶಕ್ತಿ.

26. Which of the following test helps in determining the chances of success in a given profession ?

- (1) TAT
- (2) DAT
- (3) CAT
- (4) 16 PF

27. Vicarious reinforcement is the contribution of

- (1) Operant conditioning theory
- (2) Classical conditioning theory
- (3) Social learning theory
- (4) Perceptual learning theory

28. Which of the following is the most subjective method of understanding behaviour ?

- (1) Observation
- (2) Introspection
- (3) Case Study
- (4) Experimentation

29. The following are the stages of creativity, except

- (1) Preparation
- (2) Assimilation
- (3) Incubation
- (4) Illumination

26. ಒಂದು ನಿಗದಿತ ವೃತ್ತಿಯಲ್ಲಿ ಯಶಸ್ಸನ್ನು ಗಳಿಸುವ ಸಾಧ್ಯತೆಯನ್ನು ಅಳೆಯುವ ಪರೀಕ್ಷೆ ಯಾವುದು ?

- (1) TAT
- (2) DAT
- (3) CAT
- (4) 16 PF

27. ಪ್ರಾತಿನಿಧಿಕ ಪುಷ್ಟೀಕರಣವನ್ನು ನೀಡಿದ್ದು

- (1) ಕ್ರಿಯಾಜನ್ಯ ಅನುಬಂಧ ಸಿದ್ಧಾಂತ
- (2) ಸಾಂಪ್ರದಾಯಿಕ ಅನುಬಂಧ ಸಿದ್ಧಾಂತ
- (3) ಸಾಮಾಜಿಕ ಕಲಿಕೆ ಸಿದ್ಧಾಂತ
- (4) ವಿಂಬ ಕಲಿಕೆ ಸಿದ್ಧಾಂತ

28. ವರ್ತನೆಯನ್ನು ಅಭ್ಯಾಸ ಮಾಡುವ ವಿಧಾನಗಳಲ್ಲಿ ಈ ಕೆಳಗಿನ ಯಾವ ವಿಧಾನವು ಅತ್ಯಂತ ವ್ಯಕ್ತಿನಿಷ್ಠ ವಿಧಾನವಾಗಿದೆ ?

- (1) ಅವಲೋಕನ
- (2) ಅಂತರಾವಲೋಕನ
- (3) ವ್ಯಕ್ತಿ ಅಧ್ಯಯನ
- (4) ಪ್ರಾಯೋಗೀಕರಣ

29. ಈ ಕೆಳಗಿನ ಯಾವ ಒಂದು ಹಂತವನ್ನು ಹೊರತುಪಡಿಸಿ ಉಳಿದವು ಸೃಜನಶೀಲತೆಯ ಹಂತಗಳಾಗಿವೆ ?

- (1) ಸಿದ್ಧತೆ
- (2) ಸ್ವಾಗೀಕರಣ
- (3) ಪರಿಪಾಕಾವಸ್ಥೆ
- (4) ಜ್ಞಾನೋದಯ

GENERAL ENGLISH

30. She hardly studies for the CET exams. The correct question tag is

- (1) Does she ?
- (2) Doesn't she ?
- (3) Did she ?
- (4) Didn't she ?

31. I can write a book \_\_\_\_\_ grammar. The correct preposition to be filled in

- (1) on
- (2) about -
- (3) of
- (4) in -

32. Identify the part that has a mistake.

The opinion that / happiness or  
A  
suffering / depend upon / ourselves  
B C  
is not always true.  
D

- (1) A
- (2) B
- (3) C
- (4) D

⊕ Paper-1

33. 1. Innovation is work  
A. there are people who clearly more talented innovators than the rest of us  
B. it requires knowledge  
C. it also requires great ingenuity  
D. but that alone is not enough  
6. and this is because they are able to imagine and conceive what we do not even consider possible.

Arrange A, B, C, D to form a logical sequence. 1 and 6 are starting and ending sentences respectively.

- (1) ABCD
- (2) BDCA
- (3) CDBA
- (4) DBCA -

34. He always stammers in public meetings, but his today's speech .....  
Choose the correct alternative.

- (1) was fairly audible to everyone present in the hall.
- (2) was not received satisfactorily.
- (3) could not be understood properly.
- (4) was free from the defect.

35. The word 'furious' is an example of

- (1) Composition
- (2) Derivation
- (3) Onomatopocia
- (4) Back-formation

36. The synonym of 'Chivalrous' is

- (1) Gallant
- (2) Impetuous
- (3) Brave
- (4) Improverished

37. The correctly spelt word is

- (1) Ciggaret
- (2) Cigarate
- (3) Cigarette
- (4) Cigarete

38. Choose the correct sentence.

- (1) They finished the work of a day.
- (2) She goes to the temple of Durga.
- (3) We are inclined for hard work.
- (4) Service is requisite for happiness.

39. 'Teetotaler' means one who abstains from

- (1) theft
- (2) meat
- (3) taking wine
- (4) taking tea

40. His winning the talent hunt show was not a flash in the pan. The underlined idiomatic expression can be replaced by

- (1) just a one-off display of brilliance.
- (2) a noticeable achievement.
- (3) something that could be ignored.
- (4) indicative of his ability.

41. Fatuous person can also be called

- (1) sagacious
- (2) perceptive
- (3) intelligent
- (4) stupid



## COMPUTER LITERACY

### Computer Fundamentals Objective Questions for High School Teachers

42. The first digital computer built with IC chips was known as

- (1) IBM 7090
- (2) Apple-1
- (3) IBM System/360
- (4) VAX-10

43. In which language is source program written ?

- (1) English
- (2) Symbolic
- (3) High level
- (4) Temporary

44. Which is considered a direct entry input device ?

- (1) Optical Scanner
- (2) Mouse and digitizer
- (3) Light pen
- (4) All of the above

45. When were the first minicomputer built ?

- (1) 1965
- (2) 1962
- (3) 1971
- (4) 1966

42. ಐಸಿ ಚಿಪ್‌ನೊಂದಿಗೆ ಮೊದಲ ನಿರ್ಮಿಸಲಾದ ಡಿಜಿಟಲ್ ಕಂಪ್ಯೂಟರ್‌ನ ಹೆಸರು

- (1) ಐಬಿಎಂ 7090
- (2) ಆಪಲ್-1
- (3) IBM System / 360
- (4) VAX-10

43. ಯಾವ ಭಾಷೆಯಲ್ಲಿ ಮೂಲ ಪ್ರೋಗ್ರಾಂನ್ನು ಬರೆಯಲಾಗಿದೆ ?

- (1) ಇಂಗ್ಲೀಷ್
- (2) ಸಾಂಕೇತಿಕ
- (3) ಉನ್ನತ ಮಟ್ಟ
- (4) ತಾತ್ಕಾಲಿಕ

44. ನೇರ ಪ್ರವೇಶ ಇನ್ಪುಟ್ ಸಾಧನವೆಂದು ಯಾವುದನ್ನು ಪರಿಗಣಿಸಲಾಗುತ್ತದೆ ?

- (1) ಆಪ್ಟಿಕಲ್ ಸ್ಕ್ಯಾನರ್
- (2) ಮೌಸ್ ಮತ್ತು ಡಿಜಿಟೈಸರ್
- (3) ಲೈಟ್ ಪೆನ್
- (4) ಮೇಲಿನ ಎಲ್ಲಾ

45. ಮೊದಲ ಮಿನಿಕಂಪ್ಯೂಟರ್‌ನ್ನು ನಿರ್ಮಿಸಲಾದ ವರ್ಷ

- (1) 1965
- (2) 1962
- (3) 1971
- (4) 1966

46. The computer code for the interchange of information between terminals is

- (1) ASCII
- (2) BCD
- (3) EBCDIC
- (4) All of the above

47. The latest version of Nudi software

- (1) 5.1
- (2) 5.0
- (3) 5.5
- (4) 5.3

48. Which is used for manufacturing chips ?

- (1) Bus
- (2) Control Unit
- (3) Semiconductors
- (4) (1) and (2) only

46. ಟರ್ಮಿನಲ್ ನಡುವಿನ ಇಂಟರ್‌ಚೇಂಜ್ ಮಾಹಿತಿಗಾಗಿ ಕಂಪ್ಯೂಟರ್ ಸೂಚಿಸುವ ಸಂಕೇತ

- (1) ASCII
- (2) BCD
- (3) EBCDIC
- (4) ಮೇಲಿನ ಎಲ್ಲಾ

47. ಇತ್ತೀಚಿನ Nudi ತಂತ್ರಾಂಶ

- (1) 5.1
- (2) 5.0
- (3) 5.5
- (4) 5.3

48. ಚಿಪ್ಸ್ ತಯಾರಿಸಲು ಯಾವುದನ್ನು ಬಳಸುತ್ತಾರೆ ?

- (1) ಬಸ್
- (2) ಕಂಟ್ರೋಲ್ ಘಟಕ
- (3) ಅರೆವಾಹಕಗಳು
- (4) (1) ಮತ್ತು (2) ಮಾತ್ರ

48. A computer program that converts an entire program into machine language is called

- (1) Interpreter
- (2) Simulator
- (3) Compiler
- (4) Commander

49. A computer program that translates one program instructions at a time into machine language is known as

- (1) Interpreter
- (2) CPU
- (3) Compiler
- (4) Simulator

50. Personnel who design, program, operate and maintain computer equipment refers to

- (1) Console-operator
- (2) Programmer
- (3) People ware
- (4) System Analyst

48. ಇಡೀ ಕಂಪ್ಯೂಟರ್ ಪ್ರೋಗ್ರಾಂನ ಸೂಚನೆಗಳನ್ನು ಯಂತ್ರ ಭಾಷೆಗಳಿಗೆ ಪರಿವರ್ತಿಸುವುದನ್ನು ಹೀಗೆಂದು ಕರೆಯುವರು

- (1) ಇಂಟರ್‌ಪ್ರಿಟರ್
- (2) ಸಿಮ್ಯುಲೇಟರ್
- (3) ಕಂಪೈಲರ್
- (4) ಕಮಾಂಡರ್

49. ಕಂಪ್ಯೂಟರ್ ಪ್ರೋಗ್ರಾಂನ ಸೂಚನೆಗಳನ್ನು ಯಂತ್ರ ಭಾಷೆಗಳಿಗೆ ಒಂದು ಅವಧಿಗೆ ಪರಿವರ್ತಿಸುವ ಕ್ರಮವಿಧಿಯನ್ನು ಹೀಗೆಂದು ಕರೆಯುವರು

- (1) ಇಂಟರ್‌ಪ್ರಿಟರ್
- (2) ಸಿಪಿಯು
- (3) ಕಂಪೈಲರ್
- (4) ಸಿಮ್ಯುಲೇಟರ್

50. ವಿನ್ಯಾಸ, ಪ್ರೋಗ್ರಾಂ, ಕಾರ್ಯಕಾರಿತ್ವ ಮತ್ತು ಕಂಪ್ಯೂಟರ್ ಸಲಕರಣೆಗಳ ನಿರ್ವಹಣೆಯನ್ನು ಕೈಗೊಳ್ಳುವವರು

- (1) ಕನ್ಸೋಲ್ ಆಪರೇಟರ್
- (2) ಪ್ರೋಗ್ರಾಮರ್
- (3) ಪೀಪಲ್ ವೇರ್
- (4) ಸಿಸ್ಟಂ ಅನಾಲಿಸ್ಟ್

53 Find the wrong number in the series :

5, 27, 61, 122, 213, 340, 509

- (1) 122
- (2) 27
- (3) 61
- (4) 509

54 The least number which subtracted from both the terms of the fraction  $\frac{6}{7}$ , will give a ratio equal to  $\frac{16}{21}$  is

- (1) 2.6
- (2) 2.8
- (3) 3.2
- (4) 2.2

55 Everybody in a function shakes hand with everybody else. If the total number of hand shakes is 66, then the number of persons in the function is

- (1) 45
- (2) 15
- (3) 10
- (4) 12

56 A father is now 3 times as old as his son. Five years ago, he was 4 times as old as his son. The present age of the son is

- (1) 12 years
- (2) 15 years
- (3) 18 years
- (4) 20 years

\* Paper-1

53 ಕೊಟ್ಟಿರುವ ಸಂಖ್ಯೆಗಳ ಶ್ರೇಣಿಯಲ್ಲಿ ತಪ್ಪಾದ ಸಂಖ್ಯೆಯನ್ನು ಕಂಡು ಹಿಡಿಯಿರಿ.

5, 27, 61, 122, 213, 340, 509

- (1) 122
- (2) 27
- (3) 61
- (4) 509

54  $\frac{6}{7}$  ಭಿನ್ನರಾಶಿಯ ಎರಡೂ ಅಂಕಗಳಿಂದ ಕನಿಷ್ಠ ಸಂಖ್ಯೆಯನ್ನು ಕಳೆದಾಗ ಅನುಪಾತ  $\frac{16}{21}$  ಬರುತ್ತದೆ. ಆ ಕನಿಷ್ಠ ಸಂಖ್ಯೆ

- (1) 2.6
- (2) 2.8
- (3) 3.2
- (4) 2.2

55 ಸಮಾರಂಭವೊಂದರಲ್ಲಿ ಪ್ರತಿಯೊಬ್ಬರೂ ಪರಸ್ಪರ ಹಸ್ತಲಾಘವ ಮಾಡುತ್ತಾರೆ. ಒಟ್ಟು ಹಸ್ತಲಾಘವಗಳ ಸಂಖ್ಯೆ 66 ಆದರೆ, ಸಮಾರಂಭದಲ್ಲಿರುವ ಒಟ್ಟು ವ್ಯಕ್ತಿಗಳ ಸಂಖ್ಯೆ

- (1) 45
- (2) 15
- (3) 10
- (4) 12

56 ತಂದೆಯ ಈಗಿನ ವಯಸ್ಸು ಅವನ ಮಗನ ಮೂರರಷ್ಟಿದೆ. ಐದು ವರ್ಷಗಳ ಹಿಂದೆ ಅವನ ವಯಸ್ಸು ತನ್ನ ಮಗನ ವಯಸ್ಸಿನ 4 ರಷ್ಟಿದ್ದರೆ, ಮಗನ ಈಗಿನ ವಯಸ್ಸು

- (1) 12 ವರ್ಷಗಳು
- (2) 15 ವರ್ಷಗಳು
- (3) 18 ವರ್ಷಗಳು
- (4) 20 ವರ್ಷಗಳು

**Directions :** Answer the question nos. 85 and 86 based on the following information :  
Branches of 5 Banks A, B, C, D and E are as follows :

- \* A, B and C are in Indore and Bhopal.
- \* A, B and E are in Indore and Gwalior.
- \* B, C and D are in Raipur and Bhopal.
- \* A, E and D are in Gwalior and Jabalpur.
- \* C, E and D are in Raipur and Jabalpur.

57 Branch of which Bank is not in Indore ?

- (1) E
- (2) C
- (3) B
- (4) D

58 Branch of which Bank is in Raipur and Indore but not in Bhopal ?

- (1) D
- (2) A
- (3) E
- (4) C

59 Choose the number which is different from others in the group ?

- (1) 751
- (2) 734
- (3) 853
- (4) 532

ಸೂಚನೆ : ಈ ಕೆಳಗಿನ ಮಾಹಿತಿಗಳಿಂದ 85 ಮತ್ತು 86 ನೇ ಪ್ರಶ್ನೆಗಳಿಗೆ ಉತ್ತರಿಸಿ.

A, B, C, D ಮತ್ತು E ಎಂಬ 5 ಬ್ಯಾಂಕ್‌ನ ಶಾಖೆಗಳು ಈ ಕೆಳಗಿನಂತಿವೆ.

- \* A, B ಮತ್ತು C ಬ್ಯಾಂಕ್‌ನ ಶಾಖೆಗಳು ಇಂದೋರ್ ಮತ್ತು ಭೋಪಾಲ್‌ನಲ್ಲಿವೆ.
- \* A, B ಮತ್ತು E ಬ್ಯಾಂಕ್‌ನ ಶಾಖೆಗಳು ಇಂದೋರ್ ಮತ್ತು ಗ್ವಾಲಿಯರ್‌ನಲ್ಲಿವೆ.
- \* B, C ಮತ್ತು D ಬ್ಯಾಂಕ್‌ನ ಶಾಖೆಗಳು ರಾಯಪುರ ಮತ್ತು ಭೋಪಾಲ್‌ನಲ್ಲಿವೆ.
- \* A, E ಮತ್ತು D ಬ್ಯಾಂಕ್‌ನ ಶಾಖೆಗಳು ಗ್ವಾಲಿಯರ್ ಮತ್ತು ಜಬಲ್‌ಪುರನಲ್ಲಿವೆ.
- \* C, E ಮತ್ತು D ಬ್ಯಾಂಕ್‌ನ ಶಾಖೆಗಳು ರಾಯಪುರ ಮತ್ತು ಜಬಲ್‌ಪುರನಲ್ಲಿವೆ.

57 ಇಂದೋರ್‌ನಲ್ಲಿಲ್ಲದ ಬ್ಯಾಂಕ್‌ನ ಶಾಖೆ ಯಾವುದು ?

- (1) E
- (2) C
- (3) B
- (4) D

58 ರಾಯಪುರ ಮತ್ತು ಇಂದೋರ್‌ನಲ್ಲಿರುವ ಆದರೆ ಭೋಪಾಲ್‌ನಲ್ಲಿಲ್ಲದ ಬ್ಯಾಂಕ್‌ನ ಶಾಖೆ ಯಾವುದು ?

- (1) D
- (2) A
- (3) E
- (4) C

59 ಕೊಟ್ಟಿರುವ ಸಂಖ್ಯೆಗಳ ಗುಂಪಿನಲ್ಲಿ ಇತರೆ ಸಂಖ್ಯೆಗಳಿಗಿಂತ ಭಿನ್ನವಾದ ಸಂಖ್ಯೆಯೊಂದನ್ನು ಆಯ್ಕೆ ಮಾಡಿ ಬರೆಯಿರಿ.

- (1) 751
- (2) 734
- (3) 853
- (4) 532

60. Four girls are sitting on a bench to be photographed. Shikha is to the left of Reena, Manju is on the right of Reena. Rita is between Reena and Manju. Who would be second from the left in the photograph ?

- (1) Reena
- (2) Shikha
- (3) Manju
- (4) Rita

60. ಫೋಟೋ ತೆಗೆಸಿಕೊಳ್ಳಲು ನಾಲ್ಕು ಹುಡುಗಿಯರು ಬೆಂಚಿನ ಮೇಲೆ ಕುಳಿತಿದ್ದಾರೆ. ಶಿಖಾಳು ರೀನಾಳ ಎಡಗಡೆ ಇದ್ದಾಳೆ. ಮಂಜು, ರೀನಾಳ ಬಲಬದಿ ಇದ್ದಾಳೆ. ರೀಟಾಳು, ರೀನಾ ಮತ್ತು ಮಂಜುರ ಮಧ್ಯೆ ಇದ್ದಾಳೆ. ಫೋಟೋದಲ್ಲಿ ಎಡಗಡೆಯಿಂದ ಇರುವ-ಒರಡನೇ ವ್ಯಕ್ತಿ ಯಾರು ?

- (1) ರೀನಾ
- (2) ಶಿಖಾ
- (3) ಮಂಜು
- (4) ರೀಟಾ

# Teacher Placement and CET Practice

JSS Institute of Education, Sakaleshpura conducted MOCK CET Test on 3rd June 2022 under IQAC.

1. 1. Which of the following stage marks the involvement of children in their peer groups? 0 points

*Mark only one oval.*

- Adulthood
- Childhood
- Adolescence
- Early childhood

2. 2. A young female teacher, believes in personalised learning because she thinks that 0 points

*Mark only one oval.*

- learners must learn on their own
- students must enjoy their learning
- every person must be exposed to learning
- every learner is unique and must be given a chance to develop to the best of his ability

3. 3. A teacher can identify a stressed child when the child shows the following behaviour. 0 points

*Mark only one oval.*

- Aggressive behaviour
- Full concentration in studeis
- Excessive talking
- Hyperactivity

4. 4. 'Mind Mapping' refers to 0 points

*Mark only one oval.*

- a technique to enhance compreshension
- a plan of action for an adventure
- drawing the picture of a mind
- researching the function of the mind

5. 5. Identify the type of the following word problem: "I have 6 pencils. Manish has two more than me. How many penils does Manish Have? 0 points

*Mark only one oval.*

- Comparison addition
- Comparison subtraction
- Takeaway addition
- Takeaway subtraction



6. 6. Which of the following is most suitable for teaching children the concept of fractions? 0 points

*Mark only one oval.*

- Geoboards  
 Number charts  
 Cuisenaire rods  
 Abacus

7. 7. Which of the following is not a dimension of assessment of mathematical learning? 0 points

*Mark only one oval.*

- Communication  
 Patterns and procedures  
 Disposition towards mathematics  
 Mathematical reasoning

8. 8. Which of the following part of Geometry is taught in primary classes? 0 points

*Mark only one oval.*

- Formal Geometry  
 Informal Geometry  
 Both 1 and 2  
 Neither 1 nor 2

9. 9. Which of the following is one of the three types of analysis of pedagogy in education? 0 points

*Mark only one oval.*

- Pedagogical analysis of beliefs
- Pedagogical analysis of the subject
- Pedagogical analysis of emotions
- None of the above

10. 10. Which of the following is a teacher-related factor affecting learning? 0 points

*Mark only one oval.*

- Mastery over the subject matter
- Proper seating arrangement
- Availability of teaching-learning resources
- None of the above

11. 11. Environmental studies is defined as the branch that deals with the: 0 points

*Mark only one oval.*

- Design, study, and discovery of new materials.
- The study of humanities, social, biological, and physical sciences.
- Incorporate the information and physical sciences.
- Approach about the natural world and the impact of humans on its integrity.

12. 12. The functional aspects of the ecosystem are: 0 points

*Mark only one oval.*

- Energy cycles
- Nutrient cycles
- Food chains
- All of the above

13. 13. Which one of the following is not direct use of forest products? 0 points

*Mark only one oval.*

- Bamboo for baskets
- Medicine
- Gums and resins
- Grass for grazing

14. 14. Which day is celebrated as World Environment day? 0 points

*Mark only one oval.*

- June 10th
- June 5th
- July 5th
- October 20th

15. 15. A device which connects multimedia device like video camera. 0 points

*Mark only one oval.*

- Serial port
- Fire wire
- Parallel port
- USB

16. 16. Which of the following is used for Computer Aided Design Calculation? 0 points

*Mark only one oval.*

- Micro computers
- Main frame computers
- Hybrid computers
- None of the above

17. 17. Which of the following is correct with respect to spread sheet? 0 points

*Mark only one oval.*

- Work book is a document that contains one or more work sheet
- Column is given in numbers
- Row is given in letters
- Intersection of each row and column is called table

18. 18. Which of the following is not related to windows 7?

0 points

*Mark only one oval.*

- 64 bits processor
- cloud computing
- multiple fire wall
- upgraded version of XP and vista

19. 19. The following is not the feature of internet

0 points

*Mark only one oval.*

- E-Mail
- Newsgroup
- Chat
- Designing

20. 20. Find the odd one out?

0 points

*Mark only one oval.*

- Mouse
- Keyboard
- Touch screen
- Printer

21. 21. The formula to find out the literacy rate is 0 points

*Mark only one oval.*

- (Total no. of illiterates / Total population above 7 years of age) x 100
- (Total no. of literates / Total population below 6 years of age) x 100
- (Total no. of literates / Total population above 7 years of age) x 100
- (Total no. of literates / Total population above 6 years of age) x 100

22. 22. If CHARCOAL is coded as 4564913, how will you code COALCAR? 0 points

*Mark only one oval.*

- 4913413
- 6494314
- 6194416
- 4913416

23. 23. The new pedagogical and curricular structure envisaged for ECCE in NEP-2020 is 0 points

*Mark only one oval.*

- Preparatory
- Foundational
- Early childhood and care education
- Middle

24. 24. What is the limit of offline digital payment per transaction, as per RBI's recent notification? 0 points

*Mark only one oval.*

- Rs 100  
 Rs 200  
 Rs 500  
 Rs 1000

25. 25. Which Indian movie won the Best Film award at Dhaka International Film Festival? 0 points

*Mark only one oval.*

- Koozhangal  
 Jai Bhim  
 Marakkar : Lion of the Arabian Sea  
 Sarda Udham

26. 26. What is the theme of the 'World Heritage Day 2022'? 0 points

*Mark only one oval.*

- Heritage and Climate  
 Heritage and Covid  
 Preserve Heritage  
 Teaching children about Heritage

27. 27. India recently signed MoUs on Nuclear Energy Partnership and Global Innovation Partnership, with which country? 0 points

*Mark only one oval.*

- Germany
- UK
- France
- UAE

28. 28. The book titled 'Adventures of a Daredevil Democrat', which was recently published, narrates the story of which Former Chief-Minister? 0 points

*Mark only one oval.*

- M Karunanidhi
- Biju Patnaik
- Jyoti Basu
- C Achutan Menon

29. 29. Who has the largest tenure of over as head of elected government in India (Including chief Minister as well as Prime Minister) 0 points

*Mark only one oval.*

- Narendra Modi
- Manmohan Singh
- P V Narasimha Rao
- Indira Gandhi



30. 30. What was the rank of Bengaluru in the "JLL City Momentum: The World's Top 20 Most Dynamic cities Report, 2019"? 0 points

*Mark only one oval.*

- First  
 Second  
 Third  
 Fourth

31. 31. Who said this statement learning is the acquisition of habits, knowledge and attitudes. 1 point

*Mark only one oval.*

- Murphy  
 Norman L Munn  
 Crow and Crow  
 Skinner

32. 32. Who propounded the theory of classical conditioning learning? 1 point

*Mark only one oval.*

- BF Skinner  
 Kohler  
 I P Pavlov  
 J B Watson



33. 33. The two factor theory of intelligence was propounded by \_\_\_\_\_ 1 point

Mark only one oval.

- L L Thurston
- Guilford
- Spearman
- Victoria

34. 34. Which one fo the following is a Projective technique 1 point

Mark only one oval.

- Observation
- Inkblock test
- Evaluation
- Interview

35. 35. The term reinforcement was coined by \_\_\_\_\_ 1 point

Mark only one oval.


- Skinner
- Pavlov
- Murphy
- Vygotsky

---

This content is neither created nor endorsed by Google.

Google Forms



  
**PRINCIPAL**  
J.S.S. Institute of Education  
P.B. 26, SAKALESHPUR-573134  
Hassan Dist.